

## Section 8.2: Integration by Parts

When you finish your homework, you should be able to...

- $\pi$  Use the integration by parts technique to find indefinite integral and evaluate definite integrals
- $\pi$  Use the tabular method to organize an integral requiring integration by parts
- $\pi$  Recognize trends and establish guidelines for integrals requiring integration by parts

### Warm-up:

1. Differentiate with respect to the independent variable.

a.  $f(x) = \arcsin 5x$

b.  $y = \ln(5x + 1)$

c.  $r(\theta) = \tan \theta$

2. Find the indefinite integral.

a.  $\int \frac{\arctan x}{x^2 + 1} dx$

b.  $\int \frac{(\ln x)^3}{x} dx$

c.  $\int x\sqrt{5-x} dx$

3. Evaluate the definite integral.

$$\int_0^{\pi/8} \tan^2 6\theta \sec^2 6\theta d\theta$$

\_\_\_\_\_ by \_\_\_\_\_ is based on the formula for  
the \_\_\_\_\_ of a \_\_\_\_\_ and is useful for  
\_\_\_\_\_ involving products of algebraic and  
\_\_\_\_\_ functions.

Consider the following product of two functions of  $x$  that have continuous

\_\_\_\_\_.

## THEOREM: INTEGRATION BY PARTS

If  $u$  and  $v$  are functions of  $x$  and have \_\_\_\_\_ derivatives, then

This technique turns a super complicated integral into \_\_\_\_\_ ones. The trick is to choose your function \_\_\_\_\_ so that \_\_\_\_\_ is \_\_\_\_\_ than \_\_\_\_\_. Oh yeah...and **PRACTICE A \_\_\_\_\_ OF PROBLEMS!!!**

Okay...let's look at the "\_\_\_\_\_" types of Integration by Parts (IBP) problems.

Which types of expressions do not have \_\_\_\_\_ integration formulas?

1.

2.

**EXAMPLE 1:** Find the following indefinite integrals.

a.  $\int 4x^2 \ln x dx$

b.  $\int \arcsin x dx$

When you don't have a \_\_\_\_\_ factor, you need to play around with the \_\_\_\_\_. Oftentimes it works out to let \_\_\_\_\_ be the factor whose \_\_\_\_\_ is a simpler \_\_\_\_\_ than  $u$ . Then \_\_\_\_\_ would be the more \_\_\_\_\_ remaining factor. Use \_\_\_\_\_!!!

There is a lot of \_\_\_\_\_ and \_\_\_\_\_--especially at first☺

**\*\*Remember:** \_\_\_\_\_ ALWAYS includes \_\_\_\_\_!

**EXAMPLE 2:** Find the indefinite integral.

a.  $\int \frac{6x}{e^{7x}} dx$

b.  $\int x\sqrt{5-x}dx$

c.  $\int x\sec^2 xdx$

Sometimes, you need to use IBP \_\_\_\_\_ times. You may even need to \_\_\_\_\_ like \_\_\_\_\_ (yes, you can do that)!

**EXAMPLE 3:** Find the indefinite integral.

a.  $\int e^{-x} \cos 3x dx$



b.  $\int x^2 e^{-x} dx$

**THE TANZALIN (AKA TABULAR) METHOD** is a way of organizing an integration by parts problem. Let's rework the last example using this method.

DERIVATIVES	INTEGRALS	ALTERNATE SIGNS	SAME-COLOR PRODUCTS
$u$			
	$dv$		

Let's try to bring this all together...

In general, use the following choice for  $u$ , in order.

- 1.
- 2.
- 3.

\*\*When you have  $\int e^{ax} \cos bxdx$  or  $\int e^{ax} \sin bxdx$ , let \_\_\_\_\_ and let \_\_\_\_\_ or let \_\_\_\_\_.

\*\*To evaluate a definite integral, first find the \_\_\_\_\_ integral and then back substitute.

**EXAMPLE 5:** Find the indefinite integral or evaluate the definite integral.

a.  $\int_0^1 x \arcsin x^2 dx$

b.  $\int \frac{x^3 e^{x^2}}{(x^2 + 1)^2} dx$

## Section 8.3: Trigonometric Integrals

When you finish your homework, you should be able to...

- $\pi$  Find indefinite integrals and evaluate definite integrals involving the sine and cosine functions which are raised to positive powers
- $\pi$  Find indefinite integrals and evaluate definite integrals involving the secant and tangent functions which are raised to positive powers
- $\pi$  Use trigonometric identities to find indefinite integral and evaluate definite integrals involving the sine and cosine functions

**Warm-up 1:** Simplify.

a.  $1 - \sin^2 x$

b.  $1 + \tan^2 x$

c.  $\frac{1 - \cos 2x}{2}$

d.  $\frac{1 + \cos 2x}{2}$

**Warm-up 2:** Complete the statement.

a. If  $u = \sin 2x$ , then  $du =$  \_\_\_\_\_.

b. If  $u = \cos 4x$ , then  $du =$  \_\_\_\_\_.

c. If  $u = \tan x$ , then  $du =$  \_\_\_\_\_.

d. If  $u = \sec 6x$ , then  $du =$  \_\_\_\_\_.

**EXAMPLE 1:** Find the indefinite integral.

a.  $\int \frac{\cos x}{\sqrt{\sin x}} dx$

b.  $\int \sin^3 x \cos^2 x dx$

So we discovered that if the sine portion of the integrand has an \_\_\_\_\_, positive integer as a power and the cosine portion has any other power, then we save \_\_\_\_\_ sine factor, and \_\_\_\_\_ the others to \_\_\_\_\_ factors. Then \_\_\_\_\_ and \_\_\_\_\_.

c.  $\int \sin^4 2x \cos^3 2x dx$

So we discovered that if the \_\_\_\_\_ portion of the integrand has an odd, positive integer as a power and the sine portion has any other power, then we save \_\_\_\_\_ cosine factor, and \_\_\_\_\_ the others to \_\_\_\_\_ factors. Then \_\_\_\_\_ and \_\_\_\_\_.

d.  $\int \sin^4 5x dx$

So we discovered that if only one sine or cosine factor is in the integrand and has an \_\_\_\_\_, positive integer as a power, you use the \_\_\_\_\_  
\_\_\_\_\_ formula

\_\_\_\_\_ or \_\_\_\_\_ until you can use  
basic integration formulas. What should we do if both the sine and cosine are  
raised to even, positive powers?

e.  $\int \sec^4 x \tan^3 x dx$

So we discovered that if the \_\_\_\_\_ portion of the integrand has an even, positive integer as a power and the tangent portion has any other exponent, then we save \_\_\_\_\_ factors, and convert the rest to \_\_\_\_\_ factors. Then \_\_\_\_\_ and \_\_\_\_\_.



$$f. \int \sec^3 5x \tan^3 5x dx$$

So we discovered that if the \_\_\_\_\_ portion of the integrand has an odd, positive integer as a power and the secant portion has any other exponent, then we save a \_\_\_\_\_ - \_\_\_\_\_ factor, and convert the rest to \_\_\_\_\_ factors. Then \_\_\_\_\_ and \_\_\_\_\_.

g.  $\int \tan^4 x dx$

So we discovered that if there is only a \_\_\_\_\_ factor raised to a positive, \_\_\_\_\_ power, rewrite as two \_\_\_\_\_ factors, one of which is \_\_\_\_\_, convert the other to \_\_\_\_\_ minus \_\_\_\_\_, and then \_\_\_\_\_ and \_\_\_\_\_.

h.  $\int \sec^3 x dx$

So we discovered that if there is only a \_\_\_\_\_ factor raised to a positive,  
\_\_\_\_\_ power, we need to use \_\_\_\_\_ by \_\_\_\_\_.

If none of these techniques work, try converting all factors to \_\_\_\_\_ and \_\_\_\_\_ factors. Then play around with identities.

**EXAMPLE 2:** Find the indefinite integral.

a.  $\int \frac{\tan^2 x}{\sec^5 x} dx$

b.  $\int \frac{\sin^2 x - \cos^2 x}{\cos x} dx$

## PRODUCT TO SUM IDENTITIES

If \_\_\_\_\_ occur in the integral, use the following identities.

$$\sin mx \sin nx = \underline{\hspace{10em}}$$

$$\sin mx \cos nx = \underline{\hspace{10em}}$$

$$\cos mx \cos nx = \underline{\hspace{10em}}$$

You do not need to memorize these identities.

**EXAMPLE 3:** Find the indefinite integral.

$$\int \sin 7x \cos 4x dx$$

**EXAMPLE 4:** Find the area of the region bounded by the graphs of  $y = \cos^2 x$ ,  $y = \sin x \cos x$ ,  $x = -\frac{\pi}{2}$ , and  $x = \frac{\pi}{4}$ .

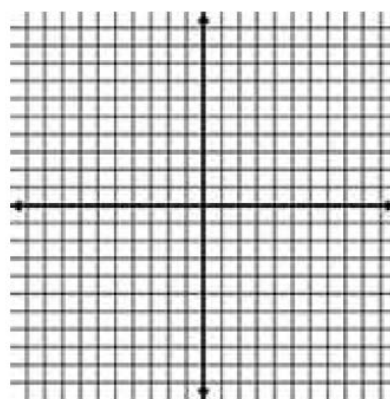
## Section 8.4: Trigonometric Substitution

When you finish your homework, you should be able to...

- $\pi$  Find indefinite integrals using trigonometric substitution
- $\pi$  Evaluate definite integrals using trigonometric substitution

**Warm-up 1:** Consider the definite integral  $\int_{-2}^2 \sqrt{4-x^2} dx$ . Do you have the skills to evaluate this definite integral? \_\_\_\_\_!

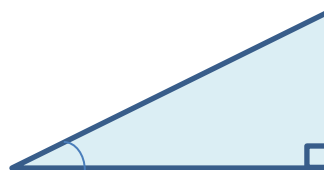
What tool did we use in Calculus I? \_\_\_\_\_!



**Warm-up 2:** Complete the figures.

a.  $u = a \sin \theta$

So,  $\sqrt{a^2 - u^2} =$

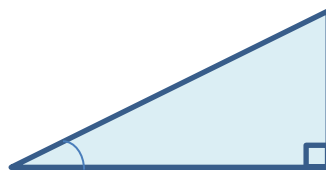


for  $-\frac{\pi}{2} \leq \theta \leq \frac{\pi}{2}$ .



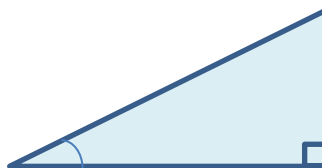
b.  $u = a \tan \theta$

So,  $\sqrt{a^2 + u^2} =$



for  $-\frac{\pi}{2} < \theta < \frac{\pi}{2}$ .

c.  $u = a \sec \theta$



So,  $\sqrt{u^2 - a^2} =$

$$\sqrt{u^2 - a^2} = \begin{cases} \text{_____} & \text{for } u > a, \text{ where } 0 \leq \theta < \frac{\pi}{2} \\ \text{_____} & \text{for } u < -a, \text{ where } \frac{\pi}{2} < \theta \leq \pi. \end{cases}$$

**NOTE:** These are the same intervals over which the \_\_\_\_\_, \_\_\_\_\_, and \_\_\_\_\_ are defined. The restrictions on \_\_\_\_\_ ensure that the function used for the substitution is \_\_\_\_\_-to-\_\_\_\_\_.

**EXAMPLE 1:** Evaluate the definite integral.

$$\int_{-2}^2 \sqrt{4-x^2} dx$$

So we discovered that if the integrand has a \_\_\_\_\_ and no basic integration rules, \_\_\_\_\_, or regular \_\_\_\_\_ integrals work, we use the substitution \_\_\_\_\_.

**EXAMPLE 2:** Find the indefinite integral.

a.  $\int \frac{\sqrt{x^2 - 16}}{x} dx$

So we discovered that if the integrand has a \_\_\_\_\_ and no basic integration rules, \_\_\_\_\_, or regular \_\_\_\_\_ integrals work, we use the substitution \_\_\_\_\_.

b.  $\int \frac{1}{x\sqrt{9x^2+1}} dx$

So we discovered that if the integrand has a \_\_\_\_\_ and no basic integration rules, \_\_\_\_\_, or regular \_\_\_\_\_ integrals work, we use the substitution \_\_\_\_\_.

c.  $\int \frac{x^2}{\sqrt{2x-x^2}} dx$

**EXAMPLE 3:** Evaluate the definite integral.

$$\int_0^{\sqrt{3}/2} \frac{1}{(1-t^2)^{5/2}} dt$$

## Section 8.5: Partial Fractions

When you finish your homework you should be able to...

- π Review how to decompose rational expressions into partial fractions
- π Utilize partial fractions to find indefinite integrals
- π Utilize partial fractions to evaluate definite integrals

**Warm-up:** Find the indefinite integral.

$$\int \frac{x^2 - x - 1}{x - 1} dx$$



## (CASE 1) $Q$ HAS ONLY NONREPEATED LINEAR FACTORS

Under the assumption that  $Q$  has only \_\_\_\_\_ linear factors, the polynomial  $Q$  has the form

where no two of the numbers \_\_\_\_\_ are equal. In this case, the partial fraction decomposition of \_\_\_\_\_ is of the form

where the numbers \_\_\_\_\_ are to be determined.

Example 1: Write the partial fraction decomposition of the rational expression in the integrand, and find the indefinite integral.

$$\int \frac{2}{9x^2 - 1} dx$$

## (CASE 2) $Q$ HAS REPEATED LINEAR FACTORS

If the polynomial  $Q$  has a \_\_\_\_\_ linear factor, say \_\_\_\_\_, \_\_\_\_\_,  $n$  is an \_\_\_\_\_, then, in the partial fraction decomposition of \_\_\_\_\_, we allow for the terms

where the numbers \_\_\_\_\_ are to be determined.

Example 2: Write the partial fraction decomposition of the rational expression in the integrand, and find the indefinite integral.

$$\int \frac{5x-2}{(x-2)^2} dx$$

**(CASE 3)  $Q$  CONTAINS A NONREPEATED IRREDUCIBLE QUADRATIC FACTOR**

If  $Q$  contains a \_\_\_\_\_ irreducible quadratic factor of the form \_\_\_\_\_, then, in the partial fraction decomposition of \_\_\_\_\_, allow for the term

where the numbers \_\_\_\_\_ are to be determined.

Example 3: Write the partial fraction decomposition of the rational expression in the integrand, and find the indefinite integral.

$$\int \frac{6x}{x^3 - 8} dx$$



## (CASE 4) $Q$ CONTAINS A REPEATED IRREDUCIBLE QUADRATIC FACTOR

If the polynomial  $Q$  contains a \_\_\_\_\_ irreducible quadratic factor of the form \_\_\_\_\_, \_\_\_\_\_,  $n$  is an \_\_\_\_\_, then, in the partial fraction decomposition of \_\_\_\_\_, allow for the terms

where the numbers \_\_\_\_\_ are to be determined.

Example 4: Write the partial fraction decomposition of the rational expression in the integrand, and evaluate the definite integral.

$$\int_0^1 \frac{x^3}{(x^2 + 16)^2} dx$$



Example 5: Find the indefinite integral.

$$\int \frac{5 \cos x}{\sin^2 x + 3 \sin x - 4} dx$$

## Section 8.7: Indeterminate Forms and L'Hôpital's Rule

When you finish your homework you should be able to...

- $\pi$  Recognize all indeterminate forms
- $\pi$  Apply L'Hôpital's Rule to evaluate limits
- $\pi$  Manipulate expressions so that L'Hôpital's Rule may be applied to evaluate limits

**WARM-UP:** Find the limit. It is okay to write  $\pm\infty$  as your answer.

1.  $\lim_{x \rightarrow 9} \frac{\sqrt{x} - 3}{x - 9}$

2.  $\lim_{x \rightarrow 1} \frac{x^3 - x^2 - x + 1}{x^2 - 1}$



$$3. \lim_{\Delta x \rightarrow 0} \frac{\frac{1}{x + \Delta x} - \frac{1}{x}}{\Delta x}$$

$$4. \lim_{x \rightarrow \pi^+} \csc x$$

5.  $\lim_{x \rightarrow 0^+} \ln x$

6.  $\lim_{x \rightarrow \infty} \arctan x$

7.  $\lim_{x \rightarrow 0} \frac{\sin 4x}{x}$

8.  $\lim_{x \rightarrow 0} \frac{1 - \cos^2 x}{x + x \cos x}$

What indeterminate form did you encounter in some of these problems?

What skills did you use to get these expressions into a determinate form?:

1.

2.

3.

### L'Hôpital's Rule

Suppose  $f$  and  $g$  are differentiable and  $g'(x) \neq 0$  near  $a$  (except possibly at  $a$ ).  
Suppose that

$$\lim_{x \rightarrow a} f(x) = 0 \text{ and } \lim_{x \rightarrow a} g(x) = 0$$

or that

$$\lim_{x \rightarrow a} f(x) = \pm\infty \text{ and } \lim_{x \rightarrow a} g(x) = \pm\infty$$

meaning that we have an \_\_\_\_\_ form of \_\_\_\_\_ or \_\_\_\_\_.

Then

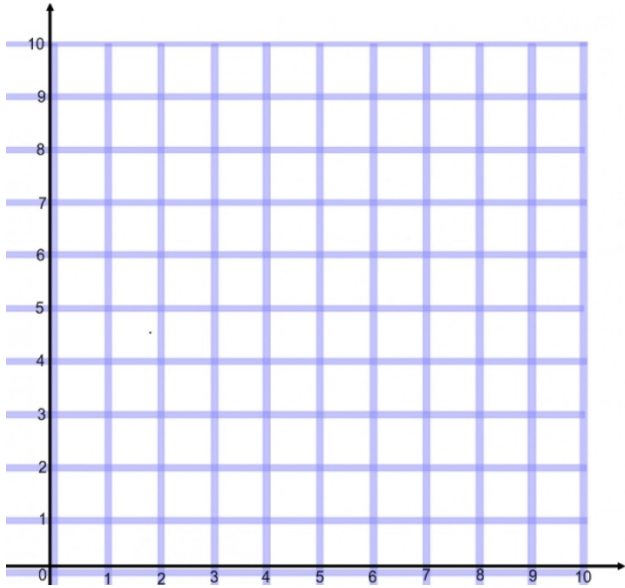
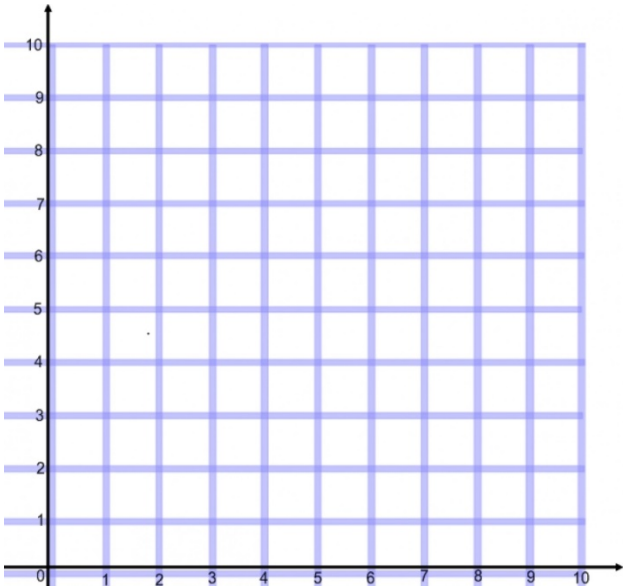
If the limit on the right side \_\_\_\_\_ or is \_\_\_\_\_ or \_\_\_\_\_.

**\*What should we check before applying L'Hôpital's Rule?**

1. \_\_\_\_\_ and \_\_\_\_\_ are \_\_\_\_\_ near \_\_\_\_\_ and
2. \_\_\_\_\_ near \_\_\_\_\_.

**\*\*L'Hôpital's Rule is also valid for \_\_\_\_\_ limits and for limits at \_\_\_\_\_ or \_\_\_\_\_.**

**\*\*\*Let's look at the special case when  $f(a) = g(a) = 0$ ,  $f'$  and  $g'$  are continuous, and  $g'(x) \neq 0$ .**



**Example 1:** Determine if L'Hôpital's Rule can be used to evaluate the limit. If so, apply L'Hôpital's Rule to evaluate the limit.

a.  $\lim_{x \rightarrow 9} \frac{\sqrt{x} - 3}{x - 9}$

b.  $\lim_{x \rightarrow 1} \frac{x^3 - x^2 - x + 1}{x^2 - 1}$

c.  $\lim_{x \rightarrow 0} \frac{\sin 4x}{x}$

d.  $\lim_{x \rightarrow 0} \frac{1 - \cos^2 x}{x + x \cos x}$

e.  $\lim_{x \rightarrow \infty} \frac{\ln x}{\sqrt{x}}$

## Indeterminate Forms

We already know that \_\_\_\_\_ and \_\_\_\_\_ represent 2 types of \_\_\_\_\_ forms. There are also indeterminate \_\_\_\_\_, \_\_\_\_\_, and \_\_\_\_\_.

**Indeterminate Products** occur when the limit of 1 \_\_\_\_\_ approaches \_\_\_\_\_ and the other factor approaches \_\_\_\_\_ or \_\_\_\_\_.

Suppose \_\_\_\_\_ and \_\_\_\_\_. If \_\_\_\_\_ prevails, the result of the limit of the \_\_\_\_\_ will be \_\_\_\_\_. If \_\_\_\_\_ is the victor, the \_\_\_\_\_ of the product will be \_\_\_\_\_. If they decide to sign a \_\_\_\_\_, the answer will be some \_\_\_\_\_, \_\_\_\_\_ number. To find out, see if you can \_\_\_\_\_ the difference into a \_\_\_\_\_.

**Example 2: Evaluate the limit.**

a.  $\lim_{x \rightarrow \infty} \sqrt{x} e^{-x/2}$

b.  $\lim_{x \rightarrow 0^+} \sin x \ln x$

**Indeterminate Differences** occur when both limits approach \_\_\_\_\_.

Suppose \_\_\_\_\_ and \_\_\_\_\_. If \_\_\_\_\_ prevails, the result of the limit of the \_\_\_\_\_ will be \_\_\_\_\_. If \_\_\_\_\_ is the victor, the \_\_\_\_\_ of the product will be \_\_\_\_\_. If they decide to sign a \_\_\_\_\_, the answer will be some \_\_\_\_\_ number. To find out, see if you can \_\_\_\_\_ the difference into a \_\_\_\_\_ by using a \_\_\_\_\_, \_\_\_\_\_, \_\_\_\_\_, or \_\_\_\_\_ out a \_\_\_\_\_.

**Example 3: Evaluate the limit.**

a.  $\lim_{x \rightarrow 0} (\csc x - \cot x)$

b.  $\lim_{x \rightarrow 1^+} [\ln(x^7 - 1) - \ln(x^5 - 1)]$



**Indeterminate Powers** occur when \_\_\_\_\_. There are 3 indeterminate forms that arise from this type of limit.

1. \_\_\_\_\_ and \_\_\_\_\_. This yields the indeterminate form \_\_\_\_\_.
2. \_\_\_\_\_ and \_\_\_\_\_. This yields the indeterminate form \_\_\_\_\_.
3. \_\_\_\_\_ and \_\_\_\_\_. This yields the indeterminate form \_\_\_\_\_.

To find these types of limits, see if you can take the \_\_\_\_\_  
\_\_\_\_\_:

or write the function as an \_\_\_\_\_:

**Example 4: Evaluate the limit.**

a.  $\lim_{x \rightarrow \infty} \left(1 + \frac{a}{x}\right)^{bx}$

b.  $\lim_{x \rightarrow 0^+} x^{\sqrt{x}}$


## Section 8.8: Improper Integrals

When you finish your homework you should be able to...

- π Recognize when a definite integral is improper
- π Use your integration and limit techniques to evaluate improper integrals

**WARM-UP:** Consider the function  $f(x) = \frac{2}{x^3}$ .

1. Graph the function.



2. Find the limits. It is okay to write  $\pm\infty$  as your answer.

a.  $\lim_{x \rightarrow 0^+} \frac{2}{x^3}$

b.  $\lim_{x \rightarrow \infty} \frac{2}{x^3}$

3. Evaluate the definite integral.

$$\int_1^b \frac{2}{x^3} dx$$

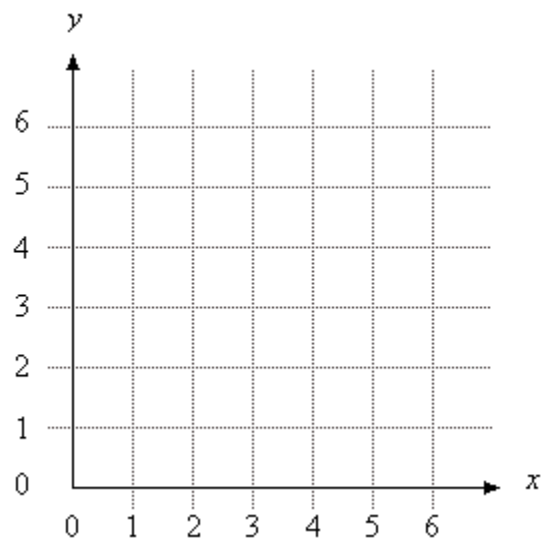
Let's put some stuff together☺

Recall that if a function is \_\_\_\_\_ on the interval \_\_\_\_\_, the \_\_\_\_\_ integral is equal to the \_\_\_\_\_ under the \_\_\_\_\_ and bounded by the \_\_\_\_\_. Also remember that a function is said to have an infinite \_\_\_\_\_ at \_\_\_\_\_ when, from the \_\_\_\_\_ or the left,

### TYPE 1: INFINITE INTERVALS

Now consider the following definite integral.

$$\int_1^{\infty} \frac{2}{x^3} dx$$



### Definition: Improper Integrals With Infinite Integration Limits

1. Suppose  $f$  is continuous on the interval from \_\_\_\_\_, then

$$\int_a^{\infty} f(x) dx =$$

2. Suppose  $f$  is continuous on the interval from \_\_\_\_\_, then

$$\int_{-\infty}^b f(x) dx =$$

3. Suppose  $f$  is continuous on the interval from \_\_\_\_\_, then

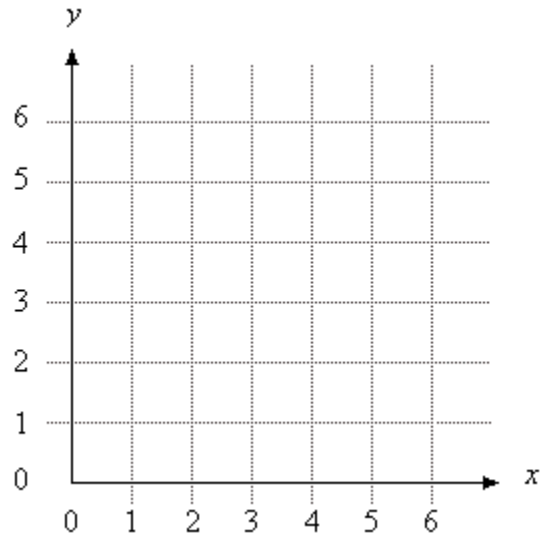
$$\int_{-\infty}^{\infty} f(x) dx =$$

where \_\_\_\_\_ is any real number.

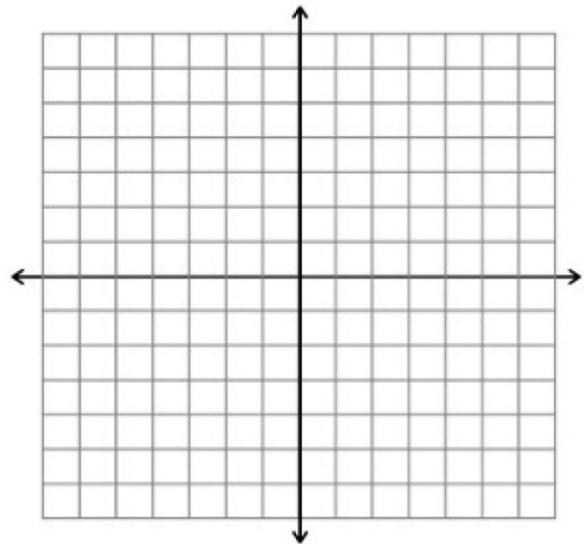
In the first two cases, the improper integral \_\_\_\_\_ when the \_\_\_\_\_ exists; otherwise the improper integral \_\_\_\_\_. In the third case, the improper integral on the left \_\_\_\_\_ when either of the improper integrals on the \_\_\_\_\_ diverge.

**Example 1:** If possible, evaluate the following definite integrals and ascertain if they are convergent or divergent.

a.  $\int_1^{\infty} \frac{dx}{x}$



b.  $\int_{-\infty}^{\infty} \frac{dx}{4+x^2}$



## TYPE 2: DISCONTINUOUS INTEGRANDS

Now consider the following definite integral.

$$\int_0^1 \frac{\ln x}{\sqrt{x}} dx$$

## Definition: Improper Integrals With Infinite Discontinuities

1. Suppose  $f$  is continuous on the interval from \_\_\_\_\_, and has an infinite \_\_\_\_\_ at \_\_\_\_\_, then

$$\int_a^b f(x) dx =$$

2. Suppose  $f$  is continuous on the interval from \_\_\_\_\_, and has an infinite \_\_\_\_\_ at \_\_\_\_\_, then

$$\int_a^b f(x) dx =$$

3. Suppose  $f$  is continuous on the interval from \_\_\_\_\_, except for some \_\_\_\_\_ in \_\_\_\_\_ at which  $f$  has an infinite \_\_\_\_\_ at \_\_\_\_\_, then

$$\int_a^b f(x) dx =$$

In the first two cases, the improper integral \_\_\_\_\_ when the \_\_\_\_\_ exists; otherwise the improper integral \_\_\_\_\_. In the third case, the improper integral on the left \_\_\_\_\_ when either of the improper integrals on the \_\_\_\_\_ diverge.

**Example 2:** If possible, evaluate the following definite integrals and ascertain if they are convergent or divergent.

a.  $\int_3^6 \frac{dx}{\sqrt{36-x^2}}$

b.  $\int_1^{\infty} \frac{dx}{x \ln x}$



Consider  $\int \frac{dx}{x^p}$ , where  $p$  is a real number. Let's find the indefinite integral on

1.  $p = 0$

2.  $p \neq 1$

3.  $p = 1$

**Example 3:** Determine all values of  $p$  for which the improper integral converges.

$$\int_1^{\infty} \frac{dx}{x^p}$$

## THEOREM: A SPECIAL TYPE OF IMPROPER INTEGRAL

$$\int_1^{\infty} \frac{dx}{x^p} = \begin{cases} \frac{1}{p-1}, & p > 1 \\ \text{diverges,} & p < 1 \end{cases}$$

**Example 4:** If possible, evaluate the following definite integrals and ascertain if they are convergent or divergent.

a.  $\int_1^{\infty} \frac{dx}{x^{1/2}}$

b.  $\int_1^{\infty} x^{-3} dx$

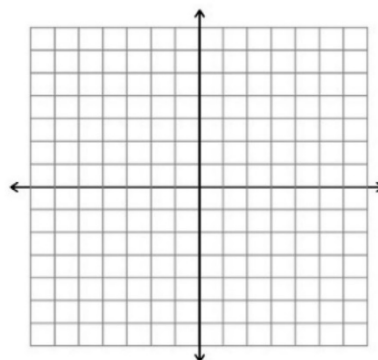
## 9.1: Sequences

When you finish your homework you should be able to...

- $\pi$  Identify the terms of a sequence, write a formula for the  $n$ th term of a sequence, and ascertain whether a sequence converges or diverges.
- $\pi$  Use properties of monotonic sequences and bounded sequences.

**WARM-UP:** Consider the function  $f(x) = \sqrt{x}$ .

1. Sketch the graph of the function.



2. Find the following:

a.  $f(0) = \underline{\hspace{2cm}}$

c.  $f(2) = \underline{\hspace{2cm}}$

e.  $f(4) = \underline{\hspace{2cm}}$

b.  $f(1) = \underline{\hspace{2cm}}$

d.  $f(3) = \underline{\hspace{2cm}}$

f.  $f(5) = \underline{\hspace{2cm}}$

g.  $\lim_{x \rightarrow 0} \sqrt{x} = \underline{\hspace{2cm}}$

i.  $\lim_{x \rightarrow 4} \sqrt{x} = \underline{\hspace{2cm}}$

h.  $\lim_{x \rightarrow 1} \sqrt{x} = \underline{\hspace{2cm}}$

j.  $\lim_{x \rightarrow \infty} \sqrt{x} = \underline{\hspace{2cm}}$

3. Now consider  $a_n = \sqrt{n}$ .

4. Find the following:

a.  $a_1 = \underline{\hspace{2cm}}$

c.  $a_3 = \underline{\hspace{2cm}}$

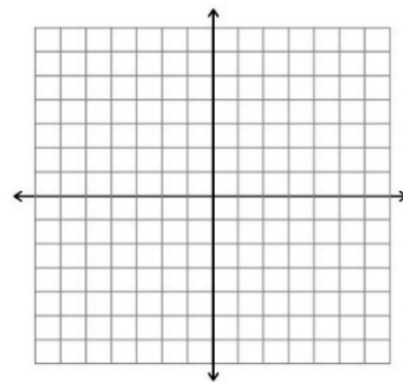
e.  $a_5 = \underline{\hspace{2cm}}$

b.  $a_2 = \underline{\hspace{2cm}}$

d.  $a_4 = \underline{\hspace{2cm}}$

Hmmm...so it looks like  $\underline{\hspace{2cm}}$  equals  $\underline{\hspace{2cm}}$  at all of the  $\underline{\hspace{2cm}}$   
 $\underline{\hspace{2cm}}$ .

5. Sketch the graph of the sequence.



### Definition of the Limit of a Sequence

Let  $L$  be a real number. The \_\_\_\_\_ of a sequence \_\_\_\_\_ is \_\_\_\_\_, written as

$$\lim_{n \rightarrow \infty} a_n = L$$

if for  $\varepsilon > 0$ , there exists  $M > 0$  such that  $|a_n - L| < \varepsilon$  whenever  $n > M$ . If the

limit  $L$  exists, then the sequence \_\_\_\_\_ . If the limit does not

exist, then the sequence \_\_\_\_\_ .

Looking at the two graphs we sketched, as \_\_\_\_\_ it looks like

\_\_\_\_\_. So, we would say the  $\lim_{n \rightarrow \infty} a_n$  \_\_\_\_\_ and \_\_\_\_\_ .

**EXAMPLE 1:** Write the first five terms of the sequence.

a.  $a_n = \frac{3n}{n+4}$

b.  $a_1 = 6, a_{k+1} = \frac{1}{3}a_k^2$

**FACTORIALS** are factors which decrease by one. So  $5!$ , read as “five factorial” is

$5! = \underline{\hspace{2cm}} = \underline{\hspace{2cm}}$ . We will be working with unknown factorials.

In general,  $n! = \underline{\hspace{2cm}}$ , and  $0! = \underline{\hspace{2cm}}$ .

**EXAMPLE 2:** Simplify the ratio of factorials.

a.  $\frac{n!}{(n+2)!}$

b.  $\frac{(2n+2)!}{(2n)!}$

**EXAMPLE 3:** Find the  $n$ th term of the sequence.

a.  $1, \frac{1}{2}, \frac{1}{6}, \frac{1}{24}, \frac{1}{120}, \dots$

b.  $\frac{1}{2 \cdot 3}, \frac{1}{3 \cdot 4}, \frac{1}{4 \cdot 5}, \frac{1}{5 \cdot 6}, \dots$

### Theorem: Limit of a Sequence

Let  $L$  be a real number. Let  $f$  be a function of a real variable such that

If  $\{a_n\}$  is a sequence such that  $f(n) = a_n$  for every positive integer  $n$ , then

**EXAMPLE 4:** Find the limit of the sequence, if it exists.

a.  $a_n = 6 + \frac{2}{n^2}$

b.  $a_n = \cos \frac{2}{n}$

## Theorem: Properties of Limits of Sequences

Let  $\lim_{n \rightarrow \infty} a_n = L$  and  $\lim_{n \rightarrow \infty} b_n = K$ .

1.  $\lim_{n \rightarrow \infty} (a_n \pm b_n) = \underline{\hspace{2cm}}$

2.  $\lim_{n \rightarrow \infty} ca_n = \underline{\hspace{1cm}}$ ,  $c$  is any  $\underline{\hspace{1cm}}$  number.

3.  $\lim_{n \rightarrow \infty} (a_n b_n) = \underline{\hspace{2cm}}$

4.  $\lim_{n \rightarrow \infty} \left( \frac{a_n}{b_n} \right) = \underline{\hspace{1cm}}$ ,  $\underline{\hspace{1cm}}$  and  $\underline{\hspace{1cm}}$ .

**EXAMPLE 5:** Determine the convergence or divergence of the sequence with the given  $n$ th term. If the sequence converges, find its limit.

a.  $a_n = \frac{1 + (-1)^n}{n^2}$

b.  $a_n = \frac{\sqrt[3]{n}}{\sqrt[3]{n+1}}$

c.  $a_n = \frac{(n-2)!}{n!}$



## Absolute Value Theorem

For the sequence  $\{a_n\}$ , if

$\lim_{n \rightarrow \infty} |a_n| = 0$  then \_\_\_\_\_.

## Squeeze Theorem for Sequences

If  $\lim_{n \rightarrow \infty} a_n = L = \lim_{n \rightarrow \infty} b_n$  and there exists an integer  $N$  such that \_\_\_\_\_,

then \_\_\_\_\_.

**EXAMPLE 6:** Show that the sequence converges and find its limit.

$$c_n = (-1)^n \frac{1}{n!}$$

## Definition: Monotonic Sequence

A sequence  $\{a_n\}$  is \_\_\_\_\_ when its terms are \_\_\_\_\_,  
 $a_1 \leq a_2 \leq a_3 \leq \dots \leq a_n \leq \dots$  or when its terms are nonincreasing  
\_\_\_\_\_.

## Definition: Bounded Sequence

1. A sequence  $\{a_n\}$  is \_\_\_\_\_ above when there is a real number  
\_\_\_\_\_ such that  $a_n \leq M$  for all \_\_\_\_\_. The number \_\_\_\_\_ is called an  
\_\_\_\_\_ of the sequence.

2. A sequence  $\{a_n\}$  is bounded \_\_\_\_\_ when there is a real number  
\_\_\_\_\_ such that  $N \leq a_n$  for all \_\_\_\_\_. The number \_\_\_\_\_ is called a  
\_\_\_\_\_ bound of the sequence.

3. A sequence \_\_\_\_\_ is \_\_\_\_\_ when it is bounded  
\_\_\_\_\_ and \_\_\_\_\_ below.

## Theorem: Bounded Monotonic Sequences

If a sequence  $\{a_n\}$  is \_\_\_\_\_ and \_\_\_\_\_, it  
\_\_\_\_\_.

**EXAMPLE 7:** Determine whether the sequence with the given  $n$ th term is monotonic and whether it is bounded.

$$a_n = \frac{\cos n}{n}$$

**EXAMPLE 8:** Fibonacci posed the following problem: Suppose that rabbits live forever and that every month each pair produces a new pair which becomes productive at age 2 months. If we start with one newborn pair, how many pairs of rabbits will we have in the  $n$ th month?

## 9.2: Series and Convergence

When you finish your homework you should be able to...

- $\pi$  Understand and represent a convergent infinite series.
- $\pi$  Use properties of infinite geometric series.
- $\pi$  Use the  $n$ th term test for **divergence**.

We spent the last section checking out \_\_\_\_\_, and ascertaining whether a given sequence  $, a_n ,$  \_\_\_\_\_ or \_\_\_\_\_ as \_\_\_\_\_. Remember, the \_\_\_\_\_ of a sequence are represented as a \_\_\_\_\_ or \_\_\_\_\_, which need not be ordered. There are finite and \_\_\_\_\_ sequences. What if we were interested in \_\_\_\_\_ a sequence? If we are interested in summing a finite number, say  $n$ , of the \_\_\_\_\_ of a sequence, we would be finding the \_\_\_\_\_ \_\_\_\_\_. If we are interesting in finding the sum of an infinite sequence, if it exists, we would be finding an \_\_\_\_\_ sum, called an infinite \_\_\_\_\_, or just a \_\_\_\_\_.

Our main interest will be to ascertain whether a series \_\_\_\_\_ or \_\_\_\_\_.



**EXAMPLE 1:** Consider the sequence we found above.

- a. Write the first five terms, and the  $n$ th term of the sequence.
- b. Sum the first five terms.
- c. Represent this 5<sup>th</sup> partial sum as a summation.
- d. Find the limit of the sequence.

e. Find an expression for the  $n$ th partial sum.

f. What must the limit of this expression equal?

## Definition: Convergent and Divergent Series

For the infinite series  $\sum_{n=1}^{\infty} a_n$ , The \_\_\_\_\_ sum is

If the sequence of partial sums  $\{S_n\}$  \_\_\_\_\_ to  $S$ , then the series  $\sum_{n=1}^{\infty} a_n$  converges. The limit  $S$  is called the \_\_\_\_\_ of the \_\_\_\_\_.

If  $\{S_n\}$  diverges, then the series \_\_\_\_\_.

So from our first example,  $S =$  \_\_\_\_\_, and this series \_\_\_\_\_ since the \_\_\_\_\_ sum \_\_\_\_\_.

## GEOMETRIC SERIES:

### Theorem: Convergence of a Geometric Series

A geometric series with \_\_\_\_\_ converges to the sum

when \_\_\_\_\_. Otherwise, for \_\_\_\_\_, the series diverges.

**EXAMPLE 2:** Express the number as a ratio of integers.

$$0.\overline{46}$$



**EXAMPLE 3:** Show that the series  $\sum_{n=1}^{\infty} \frac{1}{n(n+2)}$  is convergent and find its sum.

**NOTE:** The series in example 3 is called a \_\_\_\_\_ series.

**EXAMPLE 4:** Show that the series  $\sum_{n=1}^{\infty} \frac{1}{n}$  diverges.

**NOTE:** The series in example 4 is called a \_\_\_\_\_ series.

**Theorem: Properties of Infinite Series**

Let  $\sum_{n=1}^{\infty} a_n$  and  $\sum_{n=1}^{\infty} b_n$  be convergent series, and let  $A$ ,  $B$ , and  $c$  be real numbers.

If  $\sum_{n=1}^{\infty} a_n = A$  and  $\sum_{n=1}^{\infty} b_n = B$ , then the following series converge to the indicated sums.

1.  $\sum_{n=1}^{\infty} ca_n = \underline{\hspace{2cm}}$

2.  $\sum_{n=1}^{\infty} (a_n + b_n) = \underline{\hspace{2cm}}$

3.  $\sum_{n=1}^{\infty} (a_n - b_n) = \underline{\hspace{2cm}}$

**EXAMPLE 5:** Determine the convergence or divergence of the series. If the series converges, find its sum.

$$\sum_{n=1}^{\infty} \frac{1+2^n}{3^n}$$

### Theorem: Limit of the $n$ th Term of a Convergent Series

If  $\sum_{n=1}^{\infty} a_n$  converges, then \_\_\_\_\_.

### Theorem: $n$ th Term Test for Divergence

If  $\lim_{n \rightarrow \infty} a_n \neq 0$ , then  $\sum_{n=1}^{\infty} a_n$  \_\_\_\_\_.

**EXAMPLE 6:** Determine the convergence or divergence of the series. Explain.

a.  $\sum_{n=1}^{\infty} \arctan n$

b.  $\sum_{n=1}^{\infty} \frac{(-3)^{n-1}}{4^n}$

c.  $\sum_{n=1}^{\infty} \left(1 + \frac{1}{n}\right)^n$

**EXAMPLE 7:** Find all values of  $x$  for which the series converges. For these values of  $x$ , write the sum as a function of  $x$ .

$$\sum_{n=0}^{\infty} 5 \left( \frac{x-2}{3} \right)^n$$

**EXAMPLE 8:** A ball is dropped from a height of 16 feet. Each time it drops  $h$  feet, it rebounds  $0.81h$  feet. Find the total distance traveled by the ball.

### 9.3: The Integral Test, P-Series, and Harmonic Series

When you finish your homework you should be able to...

- $\pi$  Use the Integral Test to ascertain whether an infinite series converges or diverges.
- $\pi$  Determine whether a  $p$ -series converges or diverges.
- $\pi$  Use properties of harmonic series.

**WARM-UP:** Determine whether the improper integral converges or diverges.

1.  $\int_1^{\infty} \frac{\ln x}{x^3} dx$

2.  $\int_1^{\infty} \frac{1}{3^x} dx$



3.  $\int_1^{\infty} \frac{1}{\sqrt{x}} dx$

## Theorem: The Integral Test

If  $f$  is \_\_\_\_\_, \_\_\_\_\_, and \_\_\_\_\_ for  $x \geq 1$  and  $a_n = f(n)$ , then

Either both \_\_\_\_\_ or both \_\_\_\_\_.

**\*\*\*NOTE:** Our interest is whether the series converges or diverges as \_\_\_\_\_, so the index of the summation can start at some integer \_\_\_\_\_ as opposed to a \_\_\_\_\_ when we apply the integral test.

**EXAMPLE 1:** Determine the convergence or divergence of the series. Explain.

a. 
$$\sum_{n=1}^{\infty} \frac{\ln n}{n^3}$$

b.  $\sum_{n=1}^{\infty} \frac{n}{n^4 + 2n^2 + 1}$

## P-Series and Harmonic Series

A harmonic series is the \_\_\_\_\_ of sounds represented by \_\_\_\_\_ waves in which the \_\_\_\_\_ of each sound is an \_\_\_\_\_ multiple of the \_\_\_\_\_ frequency. Pythagoras and his students discovered this relationship between the \_\_\_\_\_ and the \_\_\_\_\_ of the vibrating string. The most beautiful harmonies seemed to correspond with the simplest \_\_\_\_\_ of \_\_\_\_\_ numbers. Later mathematicians developed this idea into the \_\_\_\_\_ series, where the \_\_\_\_\_ in the harmonic series correspond to the node on a \_\_\_\_\_ string that produce \_\_\_\_\_ of the fundamental frequency. So, \_\_\_\_\_ is \_\_\_\_\_ the fundamental frequency, \_\_\_\_\_ is \_\_\_\_\_ times the fundamental frequency, and so on. In music, strings of the same \_\_\_\_\_, \_\_\_\_\_, and \_\_\_\_\_, and whose \_\_\_\_\_ form a harmonic series, produce \_\_\_\_\_ tones. A general harmonic series is of the form \_\_\_\_\_.

The harmonic series is a special case of the \_\_\_\_\_, where \_\_\_\_\_.

## Theorem: Convergence of $p$ -Series

The  $p$ -series

\_\_\_\_\_ for \_\_\_\_\_, and \_\_\_\_\_ for \_\_\_\_\_.

**EXAMPLE 2:** Determine the convergence or divergence of the series. Explain.

a.  $\sum_{n=1}^{\infty} \frac{1}{\sqrt{n}}$

b.  $1 + \frac{1}{\sqrt[5]{4}} + \frac{1}{\sqrt[5]{9}} + \frac{1}{\sqrt[5]{16}} + \frac{1}{\sqrt[5]{25}} + \dots$

## 9.4: Series Comparison Tests

When you finish your homework you should be able to...

- $\pi$  Use the Direct Comparison Test to ascertain whether an infinite series converges or diverges.
- $\pi$  Use the Limit Comparison Test to ascertain whether an infinite series converges or diverges.

**WARM-UP:** Determine whether the series converges or diverges.

1. 
$$\sum_{n=1}^{\infty} \frac{1}{\sqrt{n+1}}$$

$$2. \sum_{n=1}^{\infty} \frac{1}{n^2 + 4}$$

## Our Tests So Far...

**$n$ th Term Test** for \_\_\_\_\_. If \_\_\_\_\_, the series \_\_\_\_\_.  
If \_\_\_\_\_, we need to \_\_\_\_\_ further \_\_\_\_\_!!!

**Geometric Series** is of the form \_\_\_\_\_. If \_\_\_\_\_, the series \_\_\_\_\_ and its \_\_\_\_\_ is \_\_\_\_\_.  
Otherwise, the series diverges.

**Telescoping Series.** Requires \_\_\_\_\_ decomposition. The \_\_\_\_\_ is the sum of the terms which do not \_\_\_\_\_ out plus \_\_\_\_\_.

**$p$ -Series** is of the form \_\_\_\_\_. If \_\_\_\_\_, the series \_\_\_\_\_.  
If \_\_\_\_\_, the series \_\_\_\_\_.

**The Integral Test** requires that \_\_\_\_\_ is \_\_\_\_\_, continuous, and \_\_\_\_\_ for  $x \geq 1$ , and  $f(n) = a_n$  for all  $n$ . If \_\_\_\_\_ converges, \_\_\_\_\_ converges. Otherwise, \_\_\_\_\_ diverges.



## Theorem: The Direct Comparison Test

Let \_\_\_\_\_ for all  $n$ .

1. If  $\sum_{i=1}^{\infty} b_n$  \_\_\_\_\_, \_\_\_\_\_ converges.

2. If  $\sum_{i=1}^{\infty} a_n$  \_\_\_\_\_,  $\sum_{i=1}^{\infty} b_n$  \_\_\_\_\_.

**EXAMPLE 1:** Determine the convergence or divergence of the series. Explain.

a.  $\sum_{n=1}^{\infty} \frac{1}{\sqrt{n+1}}$

b.  $\sum_{n=1}^{\infty} \frac{3^n}{2^n - 1}$

## Theorem: The Limit Comparison Test

If \_\_\_\_\_, \_\_\_\_\_, and

where  $L$  is \_\_\_\_\_ and \_\_\_\_\_, then

$\sum_{i=1}^{\infty} a_n$  and  $\sum_{i=1}^{\infty} b_n$  either both \_\_\_\_\_ or both \_\_\_\_\_.

**NOTE:** When choosing your comparison, you can disregard all but the

\_\_\_\_\_ powers of \_\_\_\_\_. So, if we are testing  $\sum_{n=1}^{\infty} \frac{\sqrt{n}}{5n^2 + 2}$ , our

comparison series would be \_\_\_\_\_ = \_\_\_\_\_.

**Proof:**

**EXAMPLE 2:** Determine the convergence or divergence of the series. Explain.

a. 
$$\sum_{n=1}^{\infty} \frac{n}{n^4 + 2n^2 + 1}$$

b.  $\sum_{n=0}^{\infty} \frac{1 + \sin n}{10^n}$

## 9.5: Alternating Series

When you finish your homework you should be able to...

- $\pi$  Use the Alternating Series Test to ascertain whether an infinite series converges or diverges.
- $\pi$  Use the Alternating Series Remainder to approximate the sum of an alternating series.
- $\pi$  Classify a convergent series as conditionally convergent or absolutely convergent.

**WARM-UP:** Determine whether the series converges or diverges.

$$\sum_{n=0}^{\infty} \frac{(-1)^n}{(2)^{n+1}}$$

## Theorem: Alternating Series Test

Let \_\_\_\_\_. The alternating series  $\sum_{n=1}^{\infty} (-1)^n a_n$  and  $\sum_{n=1}^{\infty} (-1)^{n+1} a_n$  converge when both conditions below are met.

1. \_\_\_\_\_

2. \_\_\_\_\_, for all  $n$ .

**NOTE:** The second condition can be modified to require that \_\_\_\_\_ for all \_\_\_\_ greater than some integer \_\_\_\_\_.

**EXAMPLE 1:** Determine the convergence or divergence of the series. Explain.

a. 
$$\sum_{n=0}^{\infty} \frac{(-1)^n}{(2)^{n+1}}$$

b. 
$$\sum_{n=1}^{\infty} \frac{(-1)^n}{\ln(n+1)}$$

c. 
$$\sum_{n=1}^{\infty} \frac{(-1)^{n+1} n^2}{n^2 + 4}$$



d.  $\sum_{n=1}^{\infty} \frac{1}{n} \cos n\pi$

$$\text{e. } \sum_{n=1}^{\infty} (-1)^{n+1} \frac{1 \cdot 3 \cdot 5 \cdot 7 \cdots (2n-1)}{1 \cdot 4 \cdot 7 \cdot 10 \cdots (3n-2)}$$

## Theorem: Alternating Series Remainder

If a convergent alternating series satisfies the condition  $a_{n+1} \leq a_n$ , then the \_\_\_\_\_ value of the \_\_\_\_\_ involved in approximating the sum \_\_\_\_\_ by \_\_\_\_\_ is less than or equal to the first \_\_\_\_\_ term.

**EXAMPLE 2:** Approximate the sum of the series by using the first six terms.

$$\sum_{n=1}^{\infty} \frac{(-1)^{n+1} n}{3^n}$$

**EXAMPLE 3:** Determine the number of terms required to approximate the sum of the series with an error of less than 0.001.

$$\sum_{n=1}^{\infty} \frac{(-1)^n}{(2n)!}$$

### Theorem: Absolute Convergence

If the series \_\_\_\_\_ converges, then the series \_\_\_\_\_ also converges.

Which of our examples would be an example of this theorem?

## Definition of Absolute and Conditional Convergence

1. The series  $\sum a_n$  is \_\_\_\_\_ convergent when \_\_\_\_\_ converges.
2. The series  $\sum a_n$  is \_\_\_\_\_ convergent when \_\_\_\_\_ converges but \_\_\_\_\_ diverges.

**EXAMPLE 4:** Determine whether the series converges absolutely or conditionally, or diverges.

a. 
$$\sum_{n=0}^{\infty} \frac{(-1)^n}{e^{n^2}}$$

b.  $\sum_{n=1}^{\infty} (-1)^{n+1} \arctan n$

c. 
$$\sum_{n=1}^{\infty} \frac{\sin\left[(2n+1)\frac{\pi}{2}\right]}{n}$$

## 9.6: The Ratio and Root Tests

When you finish your homework you should be able to...

- $\pi$  Use the Ratio Test to ascertain whether an infinite series converges or diverges.
- $\pi$  Use the Root Test to ascertain whether an infinite series converges or diverges.
- $\pi$  Review Tests for convergence and divergence of an infinite series.

### Theorem: The Ratio Test

Let  $\sum a_n$  be a series with \_\_\_\_\_ terms.

1. The series  $\sum a_n$  converges \_\_\_\_\_ when \_\_\_\_\_.
2. The series  $\sum a_n$  diverges when \_\_\_\_\_ or \_\_\_\_\_.
3. The Ratio Test is \_\_\_\_\_ when \_\_\_\_\_.

**EXAMPLE 1:** Determine the convergence or divergence of the series using the Ratio Test.

a.  $\sum_{n=0}^{\infty} \left(\frac{2}{e}\right)^n$



b.  $\sum_{n=0}^{\infty} \frac{2^n}{n!}$

c. 
$$\sum_{n=1}^{\infty} \frac{(-1)^{n+1} (n+2)}{n(n+1)}$$

d.  $\sum_{n=0}^{\infty} \frac{(n!)^2}{(3n)!}$

## Theorem: The Root Test

1. The series  $\sum a_n$  converges \_\_\_\_\_ when \_\_\_\_\_.
2. The series  $\sum a_n$  diverges when \_\_\_\_\_ or \_\_\_\_\_.
3. The Root Test is \_\_\_\_\_ when \_\_\_\_\_.

**EXAMPLE 2:** Determine the convergence or divergence of the series using the Root Test.

a.  $\sum_{n=1}^{\infty} \frac{1}{n^n}$

b.  $\sum_{n=1}^{\infty} \left( \frac{n-2}{5n+1} \right)^n$

c.  $\sum_{n=1}^{\infty} \left( \frac{\ln n}{n} \right)^n$

d.  $\sum_{n=1}^{\infty} \frac{(n!)^n}{(n^n)^2}$

**NOW IT'S UP TO YOU!!! DETERMINE WHETHER THE FOLLOWING INFINITE SERIES CONVERGE OR DIVERGE**

1. 
$$\sum_{n=1}^{\infty} \frac{1 \cdot 3 \cdot 5 \cdot 7 \cdots (2n-1)}{2 \cdot 5 \cdot 8 \cdot 11 \cdots (3n-1)}$$

Step 1: Identify the test(s) and conditions (if applicable).

Step 2: Run the test.

Step 3: Conclusion.



2. 
$$\sum_{n=1}^{\infty} \frac{(-1)^n \sqrt{n}}{n+1}$$

Step 1: Identify the test(s) and conditions (if applicable).

Step 2: Run the test.

Step 3: Conclusion.

3. 
$$\sum_{n=1}^{\infty} \frac{n}{\sqrt{n^3 + 3n}}$$

Step 1: Identify the test(s) and conditions (if applicable).

Step 2: Run the test.

Step 3: Conclusion.

$$4. \sum_{n=1}^{\infty} \frac{3 \cdot 5 \cdot 7 \cdots (2n+1)}{18^n n! (2n-1)}$$

Step 1: Identify the test(s) and conditions (if applicable).

Step 2: Run the test.

Step 3: Conclusion.

5.  $\sum_{n=1}^{\infty} \left(\frac{n}{500}\right)^n$

Step 1: Identify the test(s) and conditions (if applicable).

Step 2: Run the test.

Step 3: Conclusion.

6.  $\sum_{n=1}^{\infty} e^{-4n}$

Step 1: Identify the test(s) and conditions (if applicable).

Step 2: Run the test.

Step 3: Conclusion.

$$7. \sum_{n=1}^{\infty} \frac{5^n - 1}{6^n - 1}$$

Step 1: Identify the test(s) and conditions (if applicable).

Step 2: Run the test.

Step 3: Conclusion.

8.  $\sum_{n=1}^{\infty} \arctan n$

Step 1: Identify the test(s) and conditions (if applicable).

Step 2: Run the test.

Step 3: Conclusion.

9.  $\sum_{n=1}^{\infty} \frac{\ln n}{n^2}$

Step 1: Identify the test(s) and conditions (if applicable).

Step 2: Run the test.

Step 3: Conclusion.



10. 
$$\sum_{n=1}^{\infty} \frac{2^n}{4n^2 - 1}$$

Step 1: Identify the test(s) and conditions (if applicable).

Step 2: Run the test.

Step 3: Conclusion.

## 9.7: Taylor Polynomials

When you finish your homework you should be able to...

- $\pi$  Find Taylor and Maclaurin polynomial approximations of elementary functions.
- $\pi$  Use the remainder of a Taylor polynomial.

**Some uses of the Taylor series for analytic functions include:**

- The \_\_\_\_\_ of the series can be used as \_\_\_\_\_ of the entire function. Keep in mind that you need a sufficient amount of \_\_\_\_\_.
- \_\_\_\_\_ and \_\_\_\_\_ of power series is \_\_\_\_\_ since it can be done \_\_\_\_\_ by term.
- \_\_\_\_\_ operations can be done on the \_\_\_\_\_ series \_\_\_\_\_. For example, \_\_\_\_\_ formula follows from Taylor series \_\_\_\_\_ for \_\_\_\_\_ and \_\_\_\_\_ functions. This result is important in the field of \_\_\_\_\_ analysis.
- \_\_\_\_\_ using the first few terms of a Taylor series can make otherwise \_\_\_\_\_ problems possible for a restricted

domain. This is often used in \_\_\_\_\_.

To find a \_\_\_\_\_ function \_\_\_\_ that \_\_\_\_\_  
another function \_\_\_\_, we choose a number \_\_\_\_ in the \_\_\_\_\_ of \_\_\_\_  
at which \_\_\_\_\_. This approximating \_\_\_\_\_ is said to  
be \_\_\_\_\_ about \_\_\_\_ or \_\_\_\_\_ at \_\_\_\_\_. The evil  
plan is to find a polynomial whose \_\_\_\_\_ looks like the graph of \_\_\_\_\_  
\_\_\_\_\_ this point. If we require that the \_\_\_\_\_ of the polynomial  
function is the \_\_\_\_\_ as the slope of the \_\_\_\_\_ at \_\_\_\_\_, then we  
also have \_\_\_\_\_. Using these two requirements we can get a  
\_\_\_\_\_ approximation of \_\_\_\_\_.

**EXAMPLE 1:** Consider  $f(x) = \frac{x}{x+1}$ .

- a. Find a first-degree polynomial function  $P_1(x) = a_0 + a_1x$  whose value and slope agree with the value and slope of  $f$  at  $x=0$ .

$x$	-0.8	-0.2	-0.1	0	0.1	0.2	1.0
$\frac{x}{x+1}$							
$P_1(x)$							

b. Now find a second-degree polynomial function  $P_2(x) = a_0 + a_1x + a_2x^2$  whose value and slope agree with the value and slope of  $f$  at  $x = 0$ .

$x$	-0.8	-0.2	-0.1	0	0.1	0.2	1.0
$\frac{x}{x+1}$	-4	-0.25	-0.1111	0	0.0909	0.16667	0.5
$P_2(x)$							

c. Let's go for a third-degree polynomial function  $P_3(x) = a_0 + a_1x + a_2x^2 + a_3x^3$  whose value and slope agree with the value and slope of  $f$  at  $x = 0$ .

$x$	-0.8	-0.2	-0.1	0	0.1	0.2	1.0
$\frac{x}{x+1}$	-4	-0.25	-0.1111	0	0.0909	0.16667	0.5
$P_3(x)$							

## Definition of $n$ th Taylor and $n$ th Maclaurin Polynomial

If  $f$  has  $n$  derivatives at  $c$ , then the polynomial

is called the \_\_\_\_\_ polynomial for \_\_\_\_\_ at \_\_\_\_\_.

If \_\_\_\_\_, then

is also called the \_\_\_\_\_ polynomial for \_\_\_\_\_.

## Remainder of a Taylor Polynomial

To \_\_\_\_\_ the \_\_\_\_\_ of approximating a function value \_\_\_\_\_ by the Taylor polynomial \_\_\_\_\_, we use the concept of a

\_\_\_\_\_.

**EXAMPLE 2:** Consider the function  $f(x) = x^2 \cos x$ .

a. Find the second Taylor polynomial for the function  $f(x) = x^2 \cos x$  centered at  $\pi$ .

b. Approximate the function at  $x = \frac{7\pi}{8}$  using the polynomial found in part a.



## Taylor's Theorem

If a function  $f$  is differentiable through order  $n+1$  in an interval  $I$  containing  $c$ , then, for each  $x$  in  $I$ , there exists  $z$  between  $x$  and  $c$  such that

where

A \_\_\_\_\_ of this theorem is that

where \_\_\_\_\_ is the \_\_\_\_\_ value of \_\_\_\_\_

between \_\_\_\_\_ and \_\_\_\_\_.

For \_\_\_\_\_ we have

Does this look familiar?

**EXAMPLE 3:** Use Taylor's Theorem to obtain an upper bound for error of the approximation. Then calculate the exact value of the error.

$$e \approx 1 + 1 + \frac{1^2}{2!} + \frac{1^3}{3!} + \frac{1^4}{4!} + \frac{1^5}{5!}$$

**EXAMPLE 4:** Determine the degree of the Maclaurin polynomial required for the error in the approximation of the function at the indicated value of  $x$  to be less than 0.001.

$$\cos(0.1)$$

## 9.8: Power Series

When you finish your homework you should be able to...

- $\pi$  Find the radius and interval of convergence of a power series.
- $\pi$  Determine the endpoint convergence of a power series.
- $\pi$  Differentiate and integrate a power series.

**WARM-UP:** Find the sixth-degree Maclaurin polynomial for  $f(x) = e^x$ .

This enables us to be able to \_\_\_\_\_ the function  
\_\_\_\_\_ near \_\_\_\_\_. We found out that the higher the \_\_\_\_\_ of the  
approximating \_\_\_\_\_, the better the approximation becomes.  
In this section, you'll see that several important \_\_\_\_\_ can be  
represented \_\_\_\_\_ by \_\_\_\_\_ series.

## Definition of Power Series

If  $x$  is a variable, then an infinite series of the form

is called a \_\_\_\_\_ series \_\_\_\_\_ at \_\_\_\_\_, where \_\_\_\_\_ is a constant.

If a power series is \_\_\_\_\_ at \_\_\_\_\_, the power series will be of the form

**EXAMPLE 1:** Find the power series for  $f(x) = e^x$ , centered at  $x = 0$ .

## Radius and Interval of Convergence

A power series in  $x$  can be thought of as a  $\sum_{n=0}^{\infty} c_n x^n$  of  $x$ .

The  $\sum_{n=0}^{\infty} c_n x^n$  of  $x$  is the  $\sum_{n=0}^{\infty} c_n x^n$  of all  $x$  for which the power series  $\sum_{n=0}^{\infty} c_n x^n$  converges. Every power series converges at its  $x=0$ .

Therefore,  $x=0$  is always in the  $\sum_{n=0}^{\infty} c_n x^n$  of  $x$ . The domain of a power series can take on any one of the following forms:

a  $\sum_{n=0}^{\infty} c_n x^n$



an  $\sum_{n=0}^{\infty} c_n x^n$



the  $\sum_{n=0}^{\infty} c_n x^n$  of  $x$  numbers



## Theorem: Convergence of a Power Series

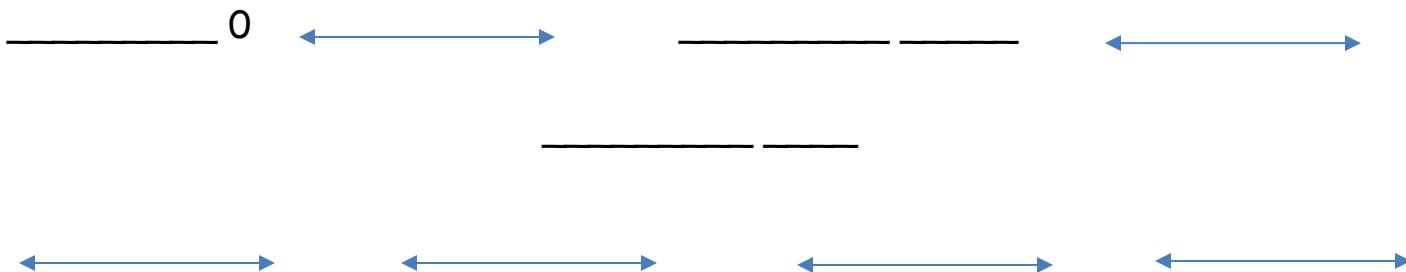
For a power series centered at  $c$ , precisely one of the following is true:

1. The series converges only at \_\_\_\_\_.
2. There exists a \_\_\_\_\_ number \_\_\_\_\_ such that the series converges \_\_\_\_\_ for \_\_\_\_\_ and diverges for \_\_\_\_\_.
3. The series converges absolutely for \_\_\_\_\_.

## Endpoint Convergence

Each \_\_\_\_\_ must be \_\_\_\_\_ for \_\_\_\_\_ or \_\_\_\_\_.

This results in \_\_\_\_\_ possible forms an \_\_\_\_\_ of \_\_\_\_\_ can take on.



**Example 2:** Find the radius and interval of convergence (including a check for convergence at the endpoints) of the following power series.

a.  $\sum_{n=0}^{\infty} (2x)^n$



b.  $\sum_{n=0}^{\infty} \frac{(3x)^n}{(2n)!}$

c. 
$$\sum_{n=0}^{\infty} \frac{(x-3)^{n+1}}{(n+1)4^{n+1}}$$

## Theorem: Properties of Functions Defined by Power Series

If the function \_\_\_\_\_  
has a radius of convergence of \_\_\_\_\_, then, on the interval \_\_\_\_\_  
 $f$  is \_\_\_\_\_ and thus \_\_\_\_\_. The derivative and  
antiderivative are given below:

1.

2.

The radius of convergence of the series obtained by \_\_\_\_\_  
or \_\_\_\_\_ a power series is the \_\_\_\_\_ as that of  
the \_\_\_\_\_ power series. What may change is the  
\_\_\_\_\_ of convergence.

**Example 3:** Let  $f(x) = \sum_{n=0}^{\infty} \frac{(-1)^n x^{2n+1}}{(2n+1)!}$  and  $g(x) = \sum_{n=0}^{\infty} \frac{(-1)^n x^{2n}}{(2n)!}$ .

a. Find the interval of convergence of  $f$ .

b. Find the interval of convergence of  $g$ .

c. Show that  $f'(x) = g(x)$ .

d. Show that  $g'(x) = -f(x)$ .

e. Identify the function  $f$ .

f. Identify the function  $g$ .

**Example 4:** Write an equivalent series with the index of summation beginning at  $n = 1$ .

a. 
$$\sum_{n=0}^{\infty} (-1)^{n+1} (n+1) x^n$$

b. 
$$\sum_{n=0}^{\infty} \frac{(-1)^n x^{2n+1}}{2n+1}$$

## 9.9: Representing Functions as Power Series

When you finish your homework you should be able to...

- $\pi$  Manipulate a geometric series to represent a function as a power series
- $\pi$  Differentiate or integrate a geometric series to represent a function as a power series.

**WARM-UP:** Find the infinite sum of the convergent series  $\sum_{n=0}^{\infty} 5\left(-\frac{3}{4}\right)^n$ .

Now consider the function  $f(x) = \frac{1}{1-x}$ .

This \_\_\_\_\_ represents  $f(x) = \frac{1}{1-x}$  only on the interval from \_\_\_\_\_ . What is the domain of  $f$ ? \_\_\_\_\_ .

How would we represent  $f$  on another interval? We must develop a \_\_\_\_\_ which is \_\_\_\_\_ at a different value.

**Example 1:** Find the power series for  $f(x) = \frac{1}{1-x}$  centered at  $c = -2$  .



**Example 2:** Find a geometric power series for the function  $f(x) = \frac{2}{5-x}$  centered at 0, (a) by manipulating the function into the format of a geometric power series and (b) by using long division.

**Example 3:** Find a power series for the function, centered at  $c$ , and determine the interval of convergence.

a.  $f(x) = \frac{3}{2x-1}, c = 2$

b.  $f(x) = \frac{4}{3x-2}, c = 3$

## Operations with Power Series

Let  $f(x) = \sum_{n=0}^{\infty} a_n x^n$  and  $g(x) = \sum_{n=0}^{\infty} b_n x^n$  be power series centered at 0.

1.  $f(kx) = \sum_{n=0}^{\infty} a_n k^n x^n$ , where \_\_\_\_\_ is a \_\_\_\_\_.

2.  $f(x^N) = \sum_{n=0}^{\infty} a_n x^{nN}$ , where \_\_\_\_\_ is a \_\_\_\_\_.

3.  $f(x) \pm g(x) = \sum_{n=0}^{\infty} (a_n \pm b_n)$

**Note:** These operations can change the \_\_\_\_\_ of \_\_\_\_\_ for the resulting series.

**Example 4:** Find a power series for the function, centered at  $c$ , and determine the interval of convergence.

a.  $f(x) = \frac{5}{5+x^2}$ ,  $c = 0$

b.  $f(x) = \frac{3x-8}{3x^2+5x-2}, c=0$

**Example 5:** Consider the functions  $f(x) = \frac{1}{1+x}$  and  $g(x) = \frac{1}{1-x} = \sum_{n=0}^{\infty} x^n$ .

a. Find a power series for  $f$ , centered at 0.

b. Use your result from part a to determine a power series, centered at 0, for the function  $h(x) = \frac{x}{x^2 - 1} = \frac{1}{2(1+x)} - \frac{1}{2(1-x)}$ . Identify the interval of convergence.

c. Use your result from part a to determine a power series, centered at 0, for the function  $r(x) = \frac{2}{(x+1)^3}$ . Identify the interval of convergence.

d. Use your result from part a to determine a power series, centered at 0, for the function  $s(x) = \ln(1 - x^2)$ . Identify the interval of convergence.



## 9.10: Taylor and Maclaurin Series

When you finish your homework you should be able to...

- $\pi$  Find a Taylor series or a Maclaurin series for a function.
- $\pi$  Find a binomial series.
- $\pi$  Use a basic list of Taylor series to derive other power series.

**WARM-UP:** Find the 8<sup>th</sup> degree Maclaurin polynomial for the function

$$f(x) = \cos x.$$

Now let's see if we can form a power series!

What about that interval of convergence?

## Theorem: The Form of a Convergent Power Series

If  $f$  is represented by a power series  $f(x) = \sum a_n(x-c)^n$  for all  $x$  in an open interval  $I$  containing  $c$ , then

and

## Definition of Taylor and Maclaurin Series

If a function  $f$  has derivatives of all orders at  $x = c$ , then the series

is called the \_\_\_\_\_ series for \_\_\_\_\_ at \_\_\_\_\_. If \_\_\_\_\_,

then the series is the \_\_\_\_\_ series for \_\_\_\_\_.

**Example 1:** Find the Taylor series, centered at  $c$ , for the function.

a.  $f(x) = e^{-4x}$ ,  $c = 0$

b.  $f(x) = \frac{1}{1-x}, c = 2$

## Theorem: Convergence of Taylor Series

If  $\lim_{n \rightarrow \infty} R_n = 0$  for all  $x$  in the interval  $I$ , then the Taylor series for  $f$  converges and equals  $f(x)$ .

**Example 2:** Prove that the Maclaurin series for  $f(x) = \cos x$  converges to  $f(x)$  for all  $x$ .

## Binomial Series

Let's check out the function  $f(x) = (1+x)^k$ , where  $k$  is a rational number. What do you think the Maclaurin series is for this function? Guess what...YOU KNOW HOW TO FIND IT!!! So, on your mark, get set, GO!

1. \_\_\_\_\_  $f(x)$  a bunch of times and evaluate each  
\_\_\_\_\_ at \_\_\_\_\_. Evil plan: \_\_\_\_\_ a  
\_\_\_\_\_.

2. Determine the \_\_\_\_\_ of \_\_\_\_\_...Don't forget  
to test the \_\_\_\_\_!

## Guidelines for Finding a Power Series

1. \_\_\_\_\_  $f(x)$  and \_\_\_\_\_ each  
\_\_\_\_\_ at \_\_\_\_\_ until you find a \_\_\_\_\_.
2. Form the \_\_\_\_\_ coefficient \_\_\_\_\_, and  
determine the \_\_\_\_\_ of convergence for the \_\_\_\_\_  
series.
3. Determine whether the series \_\_\_\_\_ to \_\_\_\_\_ within  
the interval of convergence.

**Example 3:** Find the Maclaurin series for the function using the binomial series.

a.  $f(x) = \frac{1}{(1+x)^4}$



b.  $f(x) = \sqrt{1+x^3}$

## A Basic List of Power Series for Elementary Functions

FUNCTION	INTERVAL OF CONVERGENCE
$\frac{1}{x} =$	$0 < x < 2$
$\frac{1}{1+x} = 1 - x + x^2 - x^3 + x^4 - x^5 + \dots + (-1)^n x^n + \dots$	$-1 < x < 1$
$\ln x =$	$0 < x \leq 2$
$e^x = 1 + x + \frac{x^2}{2!} + \frac{x^3}{3!} + \frac{x^4}{4!} + \frac{x^5}{5!} + \dots + \frac{x^n}{n!} + \dots$	$-\infty < x < \infty$
$\sin x = x - \frac{x^3}{3!} + \frac{x^5}{5!} - \frac{x^7}{7!} + \dots + \frac{(-1)^n x^{2n+1}}{(2n+1)!} + \dots$	$-\infty < x < \infty$
$\cos x = 1 - \frac{x^2}{2!} + \frac{x^4}{4!} - \frac{x^6}{6!} + \dots + \frac{(-1)^n x^{2n}}{(2n)!} + \dots$	$-\infty < x < \infty$
$\arctan x =$	$-1 \leq x \leq 1$
$\arcsin x =$	$-1 \leq x \leq 1$
$(1+x)^k = 1 + kx + \frac{k(k-1)x^2}{2!} + \frac{k(k-1)(k-2)x^3}{3!} + \dots$	$-1 < x < 1^*$

\*convergence at endpoints depends on  $k$

**Example 4:** Find the Maclaurin series for the function using the basic list of power series for elementary functions.

a.  $f(x) = \ln(1 + x^2)$

b.  $f(x) = e^x + e^{-x}$

c.  $f(x) = \cos^2 x$

d.  $f(x) = x \cos x$

**Example 5:** Find the first four nonzero terms of the Maclaurin series for the function  $f(x) = e^x \ln(1+x)$ .

**Example 6:** Use a power series to approximate the value of the integral with an error less than 0.0001.

$$\int_0^{1/2} \arctan x^2 dx$$

## 7.4: Arc Length and Surfaces of Revolution

When you finish your homework you should be able to...

- $\pi$  Find the arc length of a smooth curve.
- $\pi$  Find the area of a surface of revolution

Arc length is approximated by \_\_\_\_\_ infinitely many \_\_\_\_\_.


A \_\_\_\_\_ curve is one which has a \_\_\_\_\_ arc length. A

sufficient condition for the graph of a function \_\_\_\_\_ to be rectifiable between

\_\_\_\_\_ and \_\_\_\_\_ is that \_\_\_\_\_ be continuous on \_\_\_\_\_.

A function of this type is considered to be \_\_\_\_\_ differentiable

on \_\_\_\_\_ and its graph on the interval \_\_\_\_\_ is a \_\_\_\_\_.





## Definition of Arc Length

Let the function \_\_\_\_\_ represent a smooth curve on the interval \_\_\_\_\_.

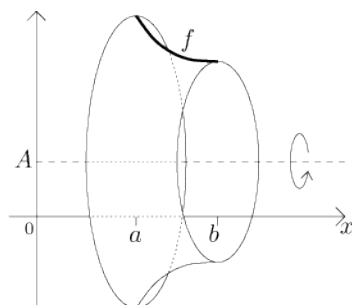
The arc length of \_\_\_\_\_ between \_\_\_\_\_ and \_\_\_\_\_ is

For a smooth curve \_\_\_\_\_ on the interval \_\_\_\_\_ the arc length of \_\_\_\_\_  
between \_\_\_\_\_ and \_\_\_\_\_ is

**EXAMPLE 1:** Find the arc length from  $(-3,4)$  clockwise to  $(4,3)$  along the circle  $x^2 + y^2 = 25$ . Show that the result is one-fourth the circumference of a circle.

## Definition of Surface of Revolution

When the graph of a continuous function is \_\_\_\_\_ about a \_\_\_\_\_, the resulting surface is a \_\_\_\_\_ of \_\_\_\_\_.



## Definition of the Area of a Surface of Revolution

Let the function \_\_\_\_\_ have a continuous derivative on the interval \_\_\_\_\_. The area \_\_\_\_\_ of the surface of revolution formed by revolving the graph of \_\_\_\_\_ about a horizontal or vertical axis is

where \_\_\_\_\_ is the distance between the graph of \_\_\_\_\_ and the axis of revolution.

If \_\_\_\_\_ on the interval \_\_\_\_\_ then the surface area is

where \_\_\_\_\_ is the distance between the graph of \_\_\_\_\_ and the axis of revolution.

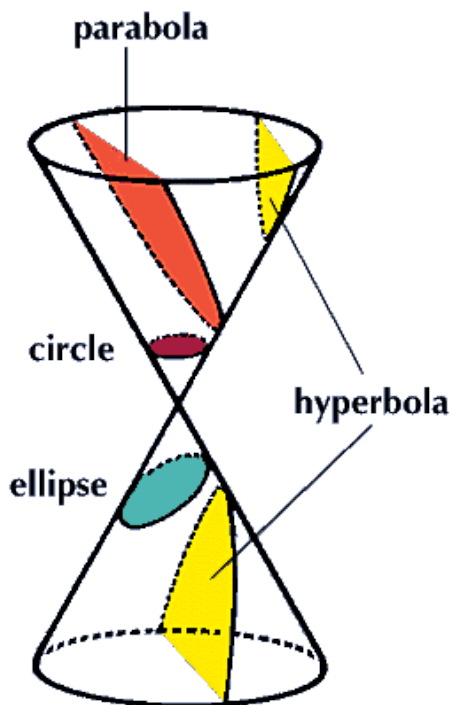
**EXAMPLE 2:** Find the area of the surface generated by revolving the curve  $y = 9 - x^2$  about the  $y$ -axis.

## 10.1: Conics and Calculus

When you finish your homework you should be able to...

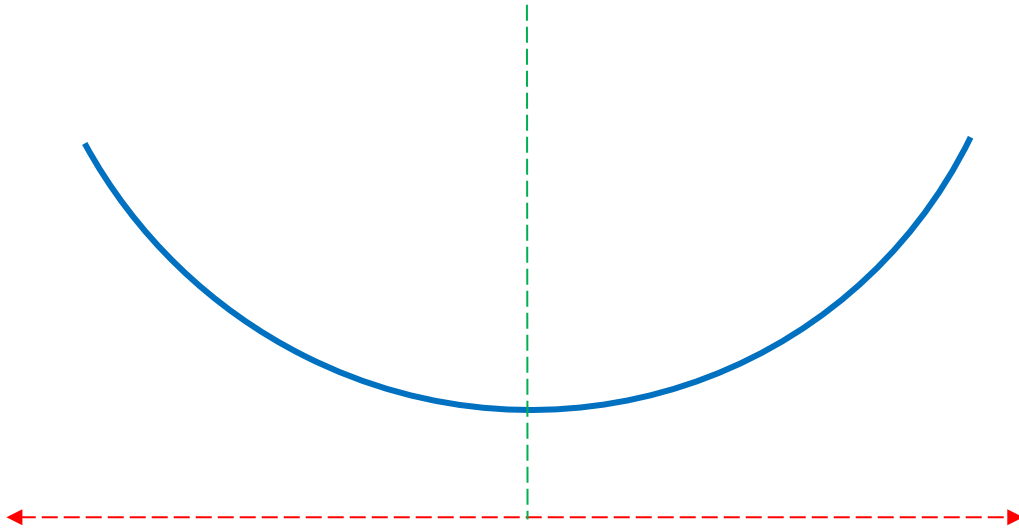
- $\pi$  Use properties of conic sections to analyze and write equations of parabolas, ellipses, and hyperbolas.
- $\pi$  Classify the graph of an equation of a conic section as a circle, parabola, ellipse, or hyperbola.
- $\pi$  Find the equations of lines tangent and normal to conic sections

The graph of each type of \_\_\_\_\_ section can be described as the intersection of a plane and two identical \_\_\_\_\_ which are connected at their vertices.



A **parabola** is the set of all

\_\_\_\_\_ that are  
\_\_\_\_\_ from a fixed line  
called the \_\_\_\_\_ and a fixed  
point called the \_\_\_\_\_.



**Theorem: Standard Equation of a Parabola**

The standard form of a parabola with vertex \_\_\_\_\_ and directrix \_\_\_\_\_ is

**Vertical axis**

The standard form of a parabola with vertex \_\_\_\_\_ and directrix \_\_\_\_\_ is

**Horizontal Axis**

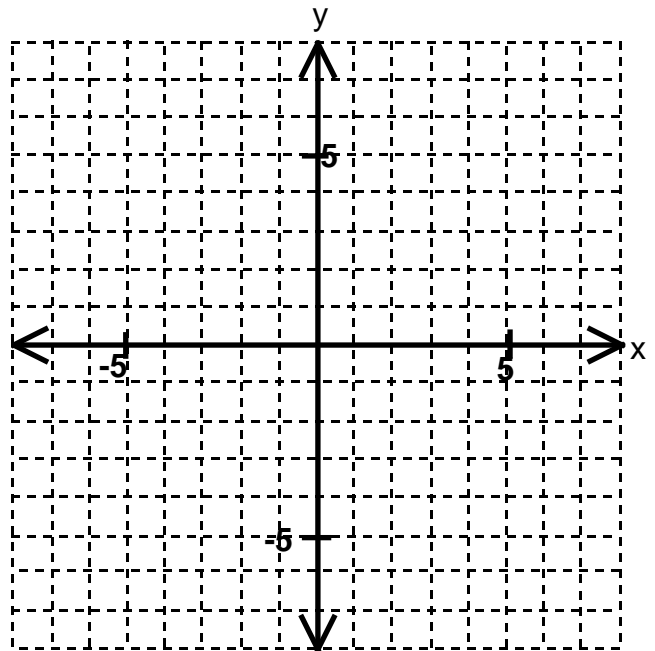
The focus lies on the axis \_\_\_\_ units from the vertex. The coordinates of the focus are

**Vertical axis**

**Horizontal Axis**

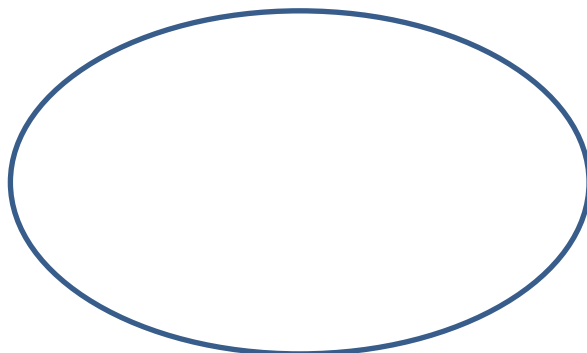
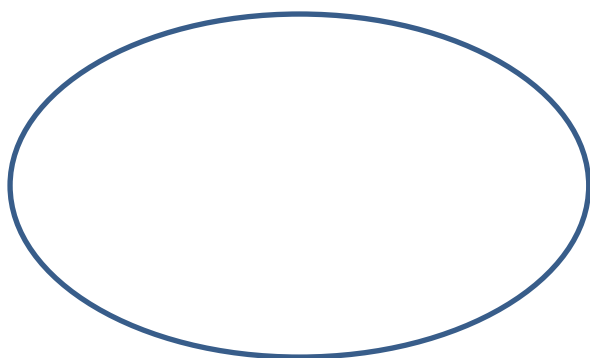
**EXAMPLE 1:** Consider  $y^2 + 6y + 8x + 25 = 0$ .

- a. Find the vertex, focus, and the directrix of the parabola and sketch its graph.



- b. Find the equation of the line tangent to the graph at  $x = -4$ .

An **ellipse** is the set of all \_\_\_\_\_ the sum of whose distances from two distinct fixed points called \_\_\_\_\_ is constant.



### **Theorem: Standard Equation of an Ellipse**

The standard form of the equation of an ellipse with center \_\_\_\_\_ and major and minor axes of lengths \_\_\_\_\_ and \_\_\_\_\_, where \_\_\_\_\_, is

**Major Axis is Horizontal**

or

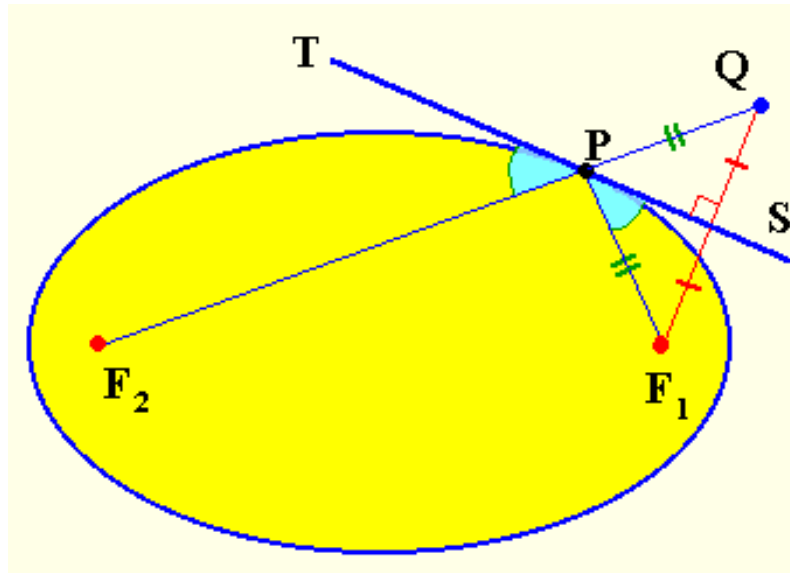
**Major Axis is Vertical**

The foci lie on the major axis, \_\_\_\_\_ units from the center, with



## Theorem: Reflective Property of an Ellipse

Let \_\_\_\_\_ be a point on an ellipse. The tangent line to the ellipse at point \_\_\_\_\_ makes \_\_\_\_\_ angles with the lines through \_\_\_\_\_ and the \_\_\_\_\_.



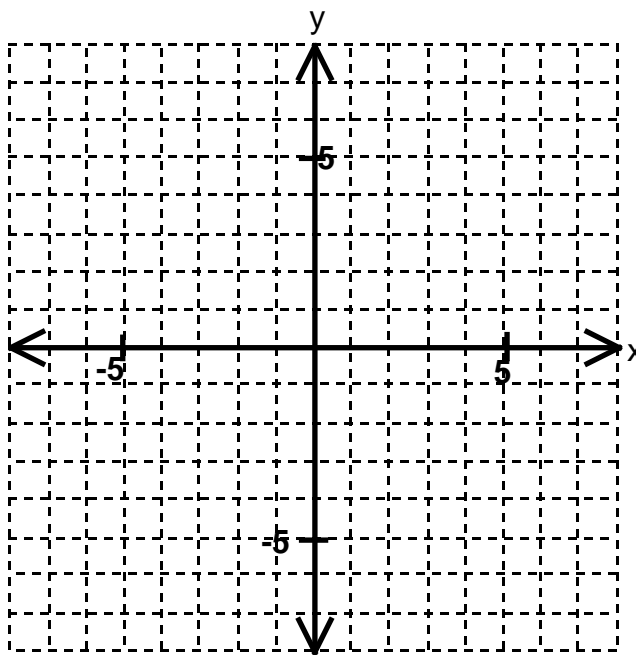
## Definition of Eccentricity of an Ellipse

The \_\_\_\_\_ of an ellipse is given by the ratio

For an ellipse that is close to being a \_\_\_\_\_, the foci are close to the \_\_\_\_\_ and the \_\_\_\_\_ is close to \_\_\_\_\_. An \_\_\_\_\_ ellipse has foci which are close to the \_\_\_\_\_ and the \_\_\_\_\_ is close to \_\_\_\_\_.

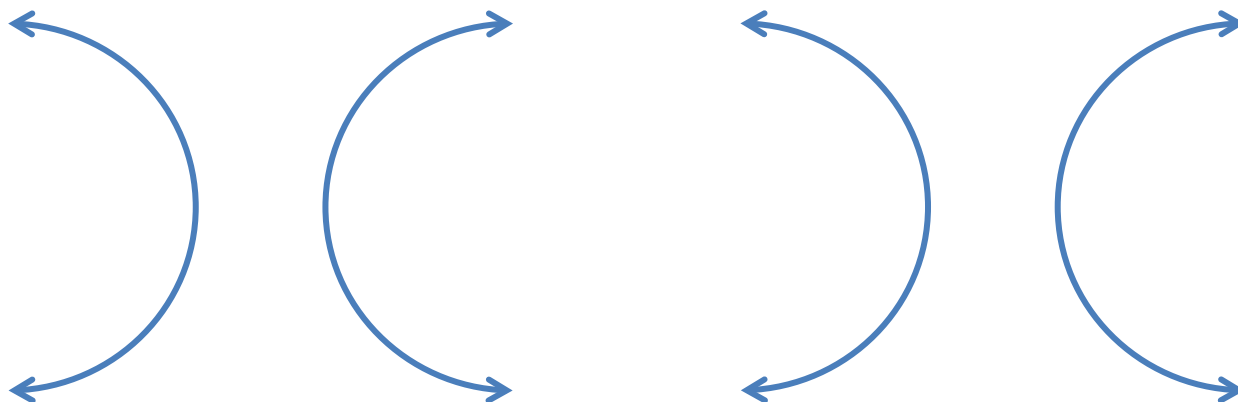
**EXAMPLE 2:** Consider  $16x^2 + 25y^2 - 64x + 150y + 279 = 0$ .

Find the center, foci, vertices, and eccentricity of the ellipse and sketch its graph.



**EXAMPLE 3:** Find an equation of the ellipse with vertices  $(0,3)$  and  $(8,3)$  and eccentricity  $\frac{3}{4}$ .

A **hyperbola** is the set of all \_\_\_\_\_ for which the absolute value of the difference between the distances from two distinct fixed points called \_\_\_\_\_ is constant. The line \_\_\_\_\_ connecting the vertices is the \_\_\_\_\_, and the \_\_\_\_\_ of the transverse axis is the \_\_\_\_\_ of the hyperbola.



**Theorem: Standard Equation of a Hyperbola**

The standard form of the equation of a hyperbola with center \_\_\_\_\_ is

**Transverse Axis is Horizontal**

or

**Transverse Axis is Vertical**

The vertices are \_\_\_\_ units from the center, and the foci are \_\_\_\_\_ units from the center with \_\_\_\_\_.

## Theorem: Asymptotes of a Hyperbola

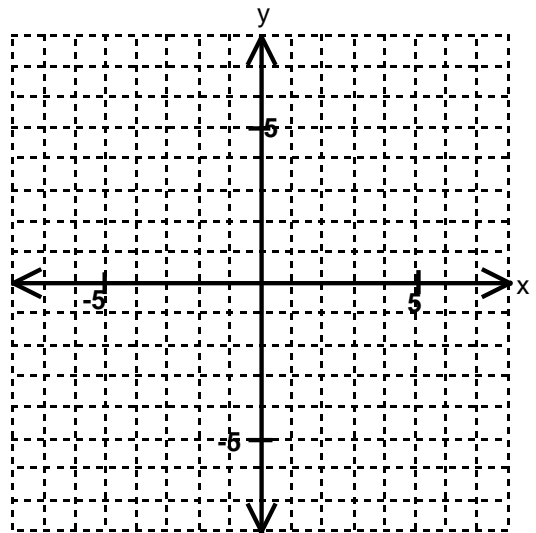
Transverse Axis is Horizontal

or

Transverse Axis is Vertical

**EXAMPLE 4:** Consider  $\frac{y^2}{4} - \frac{x^2}{2} = 1$ .

- a. Find the center, foci, and vertices of the hyperbola, and sketch its graph using asymptotes.



b. Find equations for the tangent lines to the hyperbola at  $x = 4$ .

c. Find equations for the normal lines to the hyperbola at  $x = 4$ .

**EXAMPLE 4:** A cable of a suspension bridge is suspended in the shape of a parabola between two towers that are 120 meters apart and 20 meters above the roadway. The cable touches the roadway midway between the two towers.

a. Find an equation for the parabolic shape of the cable.

b. Find the length of the cable.

## 10.2: Plane Curves and Parametric Equations

When you finish your homework you should be able to...

- $\pi$  Sketch the graph of a curve given by a set of parametric equations.
- $\pi$  Eliminate the parameter in a set of parametric equations.
- $\pi$  Find a set of parametric equations to represent a curve.

We currently use a \_\_\_\_\_ equation involving \_\_\_\_\_ variables to represent a \_\_\_\_\_. This tells us \_\_\_\_\_ an object has been but it doesn't tell us \_\_\_\_\_ the object was at a given \_\_\_\_\_. To determine this \_\_\_\_\_, we introduce a third variable, \_\_\_\_\_, called a \_\_\_\_\_. Using two equations to represent each \_\_\_\_\_ and \_\_\_\_\_ as functions of \_\_\_\_\_ gives us \_\_\_\_\_.

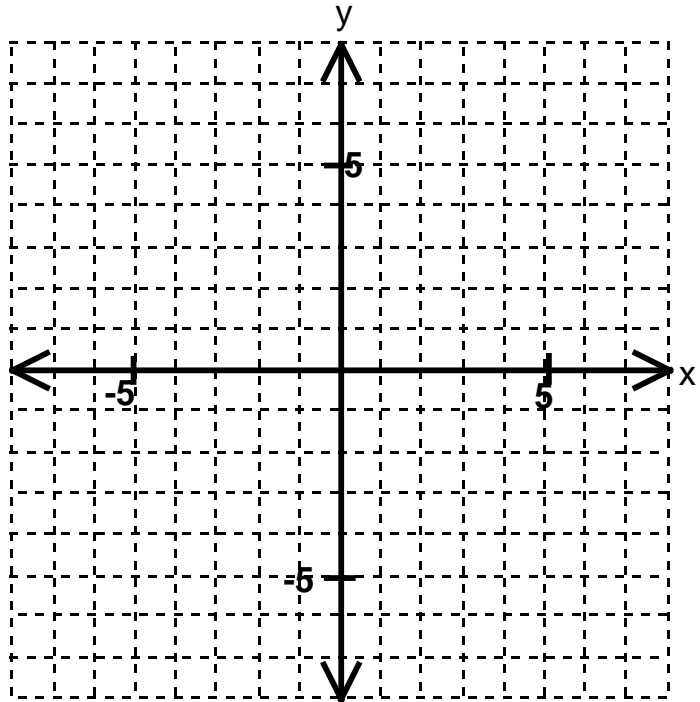
### Definition of a Plane Curve

If \_\_\_\_\_ and \_\_\_\_\_ are continuous functions of \_\_\_\_\_ on an interval \_\_\_\_\_, then the equations \_\_\_\_\_ are \_\_\_\_\_ equations and \_\_\_\_\_ is the \_\_\_\_\_. The set of points \_\_\_\_\_ obtained as \_\_\_\_\_ varies over the interval \_\_\_\_\_ is the \_\_\_\_\_ of the parametric equations. Taken together, the \_\_\_\_\_ equations and the \_\_\_\_\_ are a \_\_\_\_\_.

**EXAMPLE 1:** Consider  $x = 2t^2$ ,  $y = t^4 + 1$ .

- a. Sketch the curve represented by the parametric equations. Be sure to indicate the orientation.

$$t \quad x = 2t^2 \quad y = t^4 + 1$$

- b. Write the corresponding rectangular equation by eliminating the parameter.



**EXAMPLE 2:** Consider  $x = \cos \theta$ ,  $y = 2 \sin 2\theta$ .

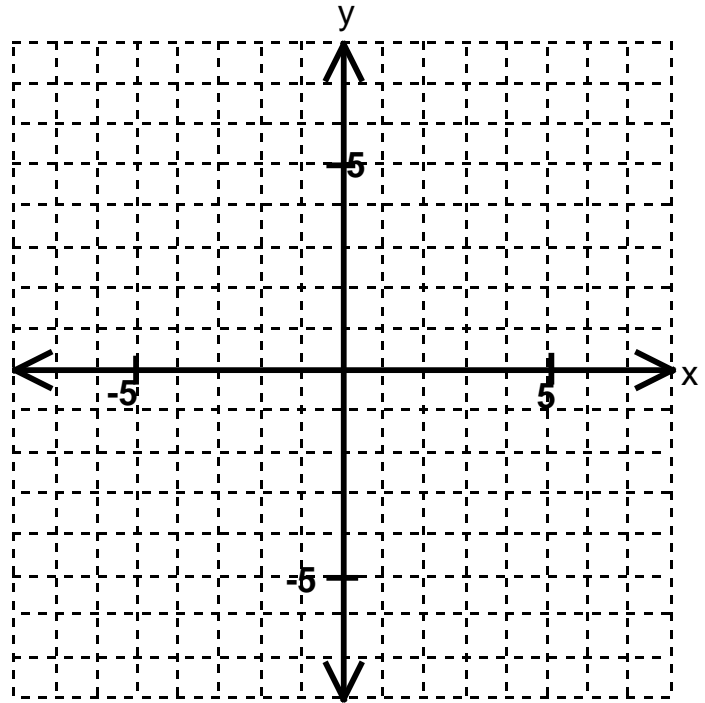
a. Use your graphing calculator to sketch the curve represented by the parametric equations. Be sure to indicate the orientation.

b. Write the corresponding rectangular equation by eliminating the parameter.

**EXAMPLE 3:** Consider  $x = -2 + 3\cos\theta$ ,  $y = -5 + 3\sin\theta$ .

- a. Sketch the curve represented by the parametric equations. Be sure to indicate the orientation.

$\theta$   $x = -2 + 3\cos\theta$   $y = -5 + 3\sin\theta$

- b. Write the corresponding rectangular equation by eliminating the parameter.

**EXAMPLE 4:** Consider  $x = e^{2t}$ ,  $y = e^t$ .

a. Use your graphing calculator to sketch the curve represented by the parametric equations. Be sure to indicate the orientation.

b. Write the corresponding rectangular equation by eliminating the parameter.

**EXAMPLE 5:** Find a set of parametric equations for the line or conic.

a. Circle: Center  $(-6, 2)$ , radius 4

b. Ellipse: Vertices  $(4, 7)$ ,  $(4, -3)$ , Foci:  $(4, 5)$ ,  $(4, -1)$ .

### 10.3: Plane Curves and Parametric Equations

When you finish your homework you should be able to...

- $\pi$  Find the slope of a line tangent to a plane curve.
- $\pi$  Find the arc length of a plane curve.
- $\pi$  Find the area of a surface of revolution given in parametric form.

#### Theorem: Parametric Form of the Derivative

If a smooth curve  $C$  is given by the equations

then the slope of  $C$  at \_\_\_\_\_ is

**EXAMPLE 1:** Consider  $x = 4\cos t$ ,  $y = 2\sin t$ ,  $0 < t < 2\pi$ .

a. Find  $\frac{dy}{dx}$ .

b. Find  $\frac{d^2y}{dx^2}$ .

c. Find all points (if any) of horizontal and vertical tangency to the curve.

d. Determine the open  $t$ -intervals on which the curve is concave downward or concave upward.

## Theorem: Arc Length in Parametric Form

If a smooth curve  $C$  is given by the equations \_\_\_\_\_ and \_\_\_\_\_ such that  $C$  does not intersect itself on the interval \_\_\_\_\_, except possibly at the endpoints, then the arc length of  $C$  over the interval is given by

**NOTE:** Make sure that the arc length is \_\_\_\_\_ only once on the interval!!!

**EXAMPLE 2:** Find the arc length of the curve given by the equations  $x = \arcsin t$  and  $y = \ln \sqrt{1-t^2}$  on the interval  $0 \leq t \leq \frac{1}{2}$ .





### Theorem: Area of a Surface of Revolution

If a smooth curve  $C$  is given by the equations \_\_\_\_\_ and \_\_\_\_\_ such that  $C$  does not intersect itself on the interval \_\_\_\_\_, then the area  $S$  of the surface of revolution formed by revolving  $C$  about the coordinate axes is given by

Revolution about the  $x$ -axis; \_\_\_\_\_

Revolution about the  $y$ -axis; \_\_\_\_\_

**EXAMPLE 3:** Find the area of the surface generated by revolving the curve given by the equations  $x = 5 \cos \theta$  and  $y = 5 \sin \theta$  on the interval  $0 \leq \theta \leq \pi$  about the  $y$ -axis.

**EXAMPLE 4:** A portion of a sphere of radius  $r$  is removed by cutting out a circular cone with its vertex at the center of the sphere. The vertex of the cone forms an angle of  $2\theta$ . Find the surface area removed from the cone.

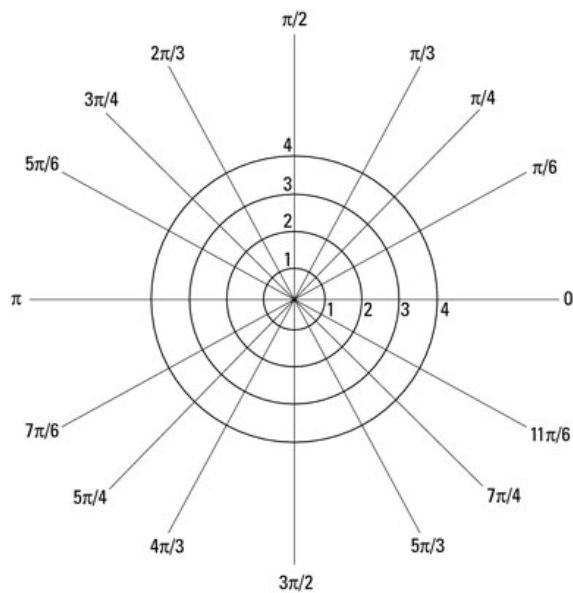
## 10.4: Polar Coordinates and Graphs

When you finish your homework you should be able to...

- $\pi$  Convert between rectangular and polar coordinates.
- $\pi$  Sketch the graph of an equation in polar form.
- $\pi$  Find the slope of a line tangent to the pole.
- $\pi$  Identify special polar graphs.

Up to this point, we've been using the \_\_\_\_\_ coordinate system to sketch graphs. Now we will be using the \_\_\_\_\_ coordinate system to sketch graphs given in \_\_\_\_\_ form. This form is very useful in the third semester calculus course as it makes many definite \_\_\_\_\_ easier to evaluate after switching from rectangular to polar coordinates. The polar coordinate system has a fixed point  $O$ , called the \_\_\_\_\_ or \_\_\_\_\_. From the pole, an initial \_\_\_\_\_ is constructed. This is called the \_\_\_\_\_ axis. Each point  $P$  in the plane is assigned \_\_\_\_\_ coordinates in the form \_\_\_\_\_. \_\_\_\_\_ represents the \_\_\_\_\_ distance from \_\_\_\_\_ to \_\_\_\_\_ and \_\_\_\_\_ is the \_\_\_\_\_ angle which is \_\_\_\_\_ from the polar axis to the segment \_\_\_\_\_. Unlike rectangular coordinates, each point in polar coordinates does NOT have a \_\_\_\_\_ representation. Can you figure out another point in polar coordinates which would be equivalent to

$(r, \theta)$ ? \_\_\_\_\_ How about  $(-r, \theta + \pi)$ ? \_\_\_\_\_



In general, the point  $(r, \theta)$  can be written as

where  $n$  is any integer. The pole is represented by  $(0, \theta)$ , where  $\theta$  is any angle.

**Theorem: Coordinate Conversion**

The polar coordinates  $(r, \theta)$  of a point are related to the rectangular coordinates \_\_\_\_\_ of the point as follows:

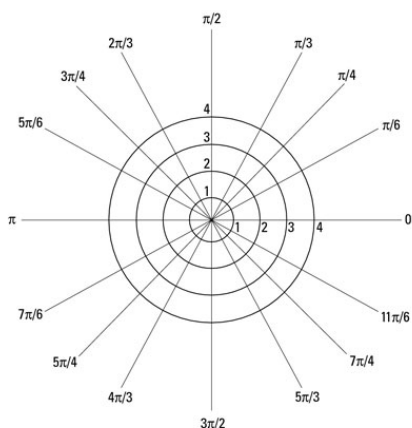
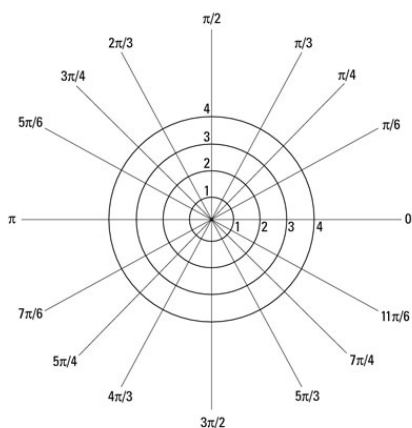
**Polar-to-Rectangular**

**Rectangular-to-Polar**

**EXAMPLE 1:** Plot the point in polar coordinates and find the corresponding rectangular coordinates for the point.

a.  $\left(3, \frac{\pi}{4}\right)$

b.  $\left(-2, \frac{5\pi}{3}\right)$



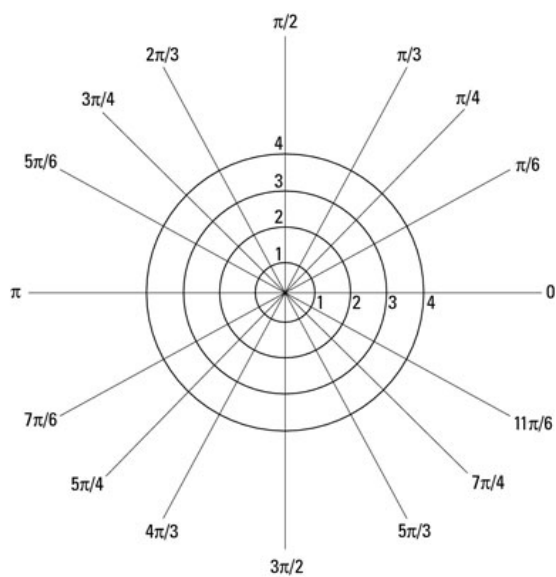
**EXAMPLE 2:** Find two corresponding polar coordinates for the point given in rectangular coordinates.

a.  $\left(3, \frac{\pi}{4}\right)$

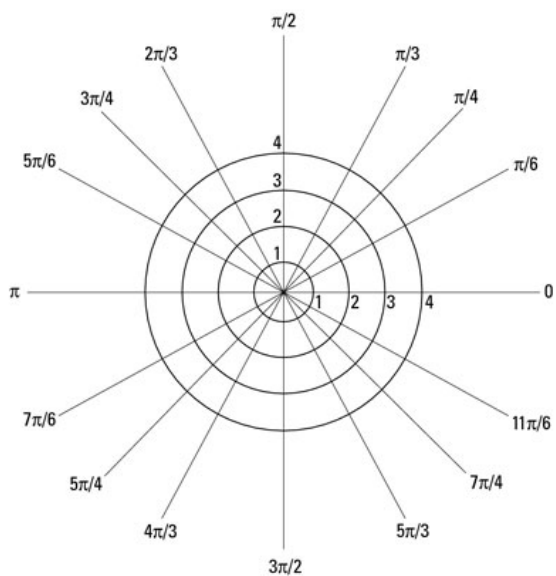
b.  $\left(-6, \frac{\pi}{2}\right)$

**EXAMPLE 3:** Sketch the graph of the polar equation, and convert to rectangular form.

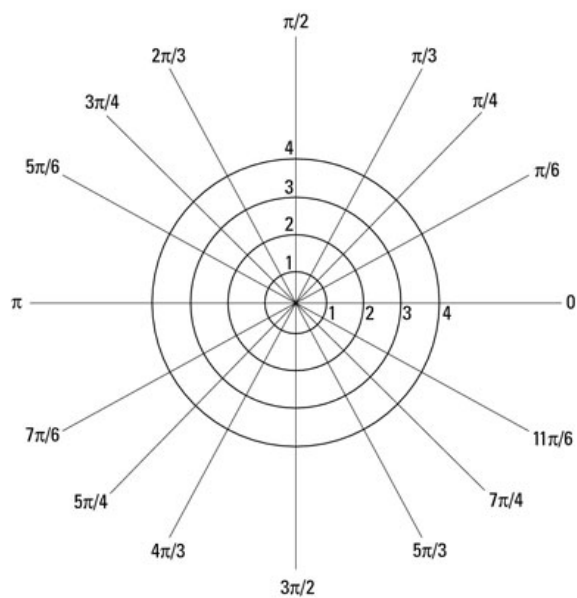
a.  $r = -4$



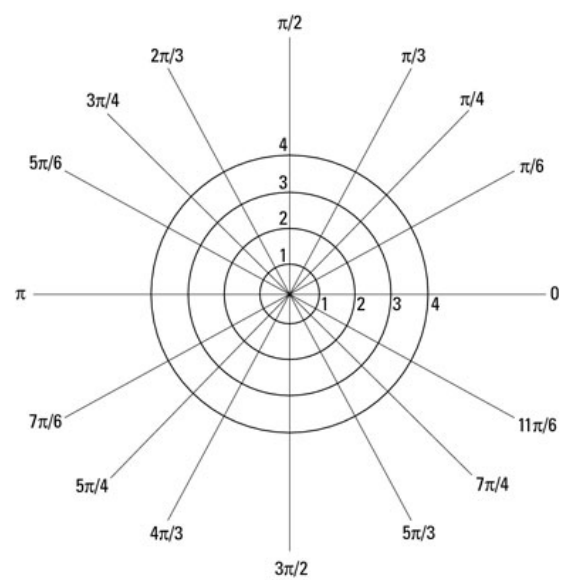
b.  $\theta = \frac{5\pi}{6}$



c.  $r = 3 \sin \theta$



d.  $r = \cot \theta \csc \theta$



**EXAMPLE 4:** Convert the rectangular equation to polar form.

a.  $x^2 - y^2 = 9$

b.  $xy = 4$



Consider  $x = r \cos \theta = f(\theta) \cos \theta$  and  $y = r \sin \theta = f(\theta) \sin \theta$ .

### Theorem: Slope in Polar Form

If  $f$  is a differentiable function of  $\theta$ , then the slope of the tangent line to the graph of  $r = f(\theta)$  at the point  $(r, \theta)$  is

provided that \_\_\_\_\_ at \_\_\_\_\_.

HMMMMM...I guess that means...

Solutions of  $\frac{dy}{d\theta} = 0$  yield \_\_\_\_\_ tangents, provided  $\frac{dx}{d\theta} \neq 0$ .

Solutions of  $\frac{dx}{d\theta} = 0$  yield \_\_\_\_\_ tangents, provided  $\frac{dy}{d\theta} \neq 0$ .

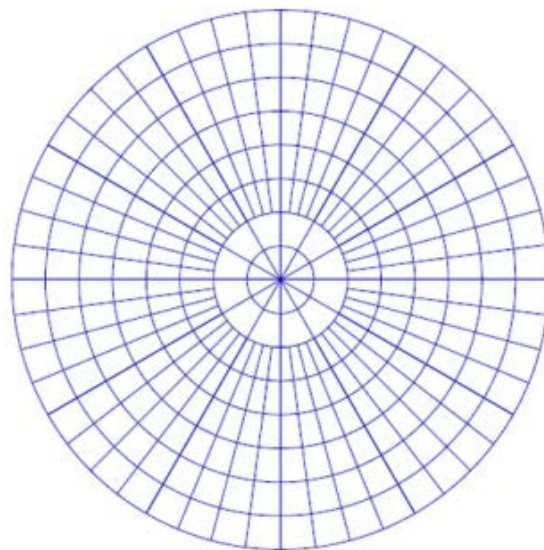
If  $\frac{dy}{d\theta} = 0$  and  $\frac{dx}{d\theta} = 0$  simultaneously, then no conclusion can be drawn about \_\_\_\_\_ lines.

### Theorem: Tangent Lines at the Pole

If  $f(\alpha) = 0$  and  $f'(\alpha) \neq 0$ , then the line  $f(\alpha) = 0$  is \_\_\_\_\_ at the \_\_\_\_\_ to the graph of \_\_\_\_\_.

**EXAMPLE 5:** Consider  $r = 2(1 - \sin \theta)$ . Hint: use  $\frac{\pi}{24}$  for the increment between the values of  $\theta$ .

a. Sketch the graph of the equation.



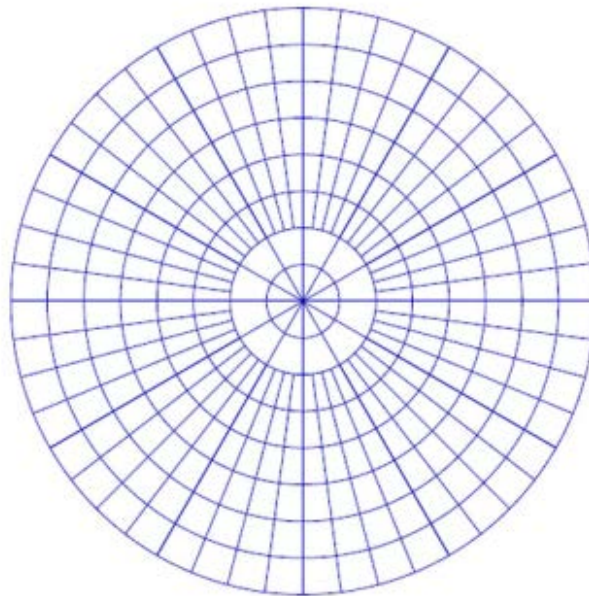
b. Find  $\frac{dy}{dx}$ .

c. Find all points (if any) of horizontal and vertical tangency to the curve.

d. Find the tangents at the pole.

**EXAMPLE 6:** Consider  $f(\theta) = 8\cos 3\theta$ .

a. Graph the equation by hand.



b. Find  $\frac{dy}{dx}$ .

c. Find all points (if any) of horizontal and vertical tangency to the curve.

d. Find the tangents at the pole.

## 10.5: Area and Arc Length in Polar Coordinates

When you finish your homework you should be able to...

- $\pi$  Find the points of intersection between polar graphs.
- $\pi$  Find the area of a region bounded by a polar graph.
- $\pi$  Find the arc length of a polar graph.
- $\pi$  Find the area of a surface of revolution (polar form)

To find the points of \_\_\_\_\_ of polar graphs, you merely \_\_\_\_\_ the \_\_\_\_\_ of \_\_\_\_\_ equations.

**EXAMPLE 1:** Find the points of intersection of the graphs of the equations  $r = 3(1 + \sin \theta)$  and  $r = 3(1 - \sin \theta)$ .

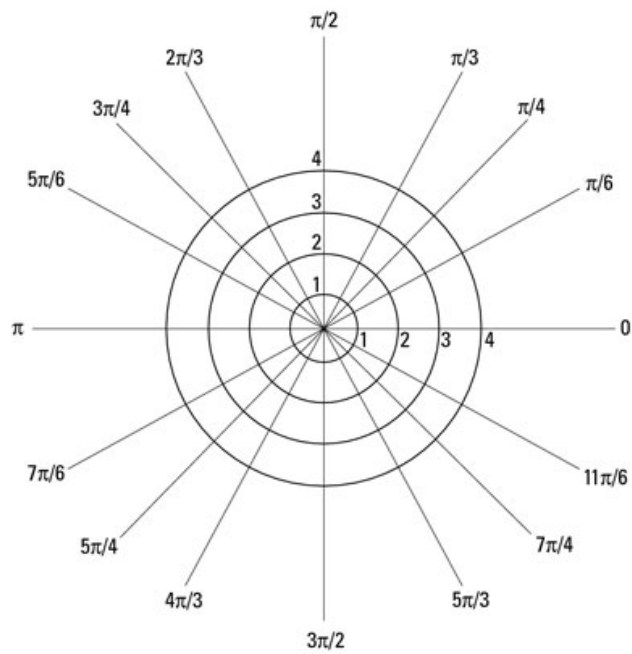
The formula for the \_\_\_\_\_ of a \_\_\_\_\_ region is developed by \_\_\_\_\_ infinitely many \_\_\_\_\_ of \_\_\_\_\_. Recall that the area of a sector is \_\_\_\_\_.

### Theorem: Area in Polar Coordinates

If  $f$  is continuous and nonnegative on the interval  $[\alpha, \beta]$ ,  $0 < \beta - \alpha \leq 2\pi$ , then the area of the region bounded by the graph of  $r = f(\theta)$  between the radial lines  $\theta = \alpha$  and  $\theta = \beta$  is

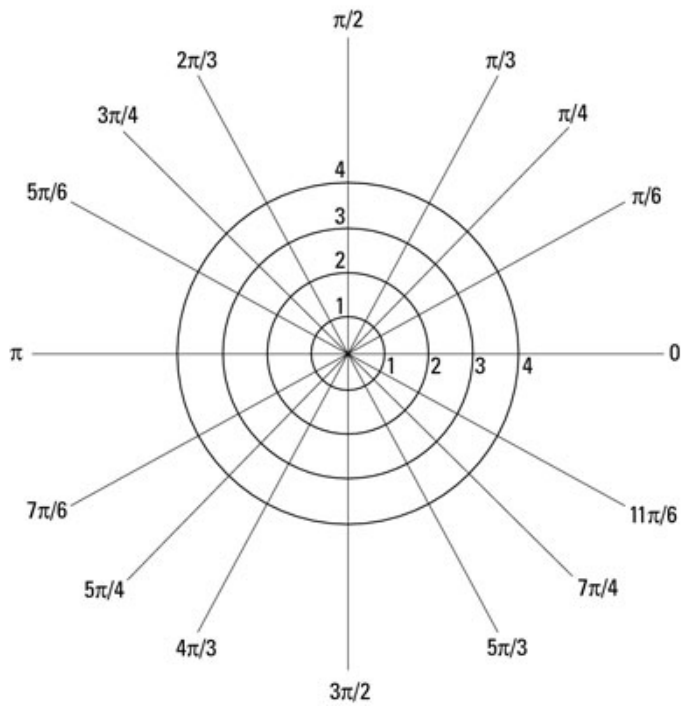
$$0 < \beta - \alpha \leq 2\pi$$

**EXAMPLE 2:** Find the area of the region of one petal of  $r = 4 \sin 3\theta$ .

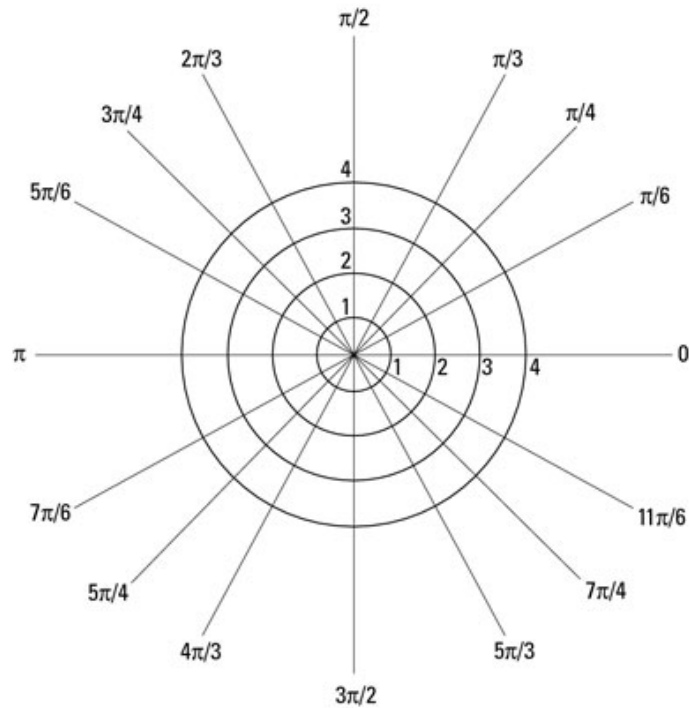




**EXAMPLE 3:** Find the area of the region of the interior of  $r = 4 - 4 \cos \theta$ .



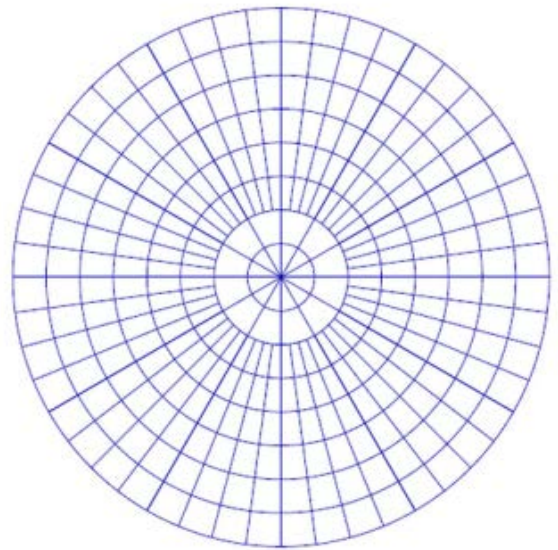
**EXAMPLE 4:** Find the area of the common interior of  $r = 2(1 + \cos \theta)$  and  $r = 2(1 - \cos \theta)$ .



### Theorem: Arc Length of a Polar Curve

Let  $f$  be a function whose derivative is continuous on an interval  $\alpha \leq \theta \leq \beta$ . The length of the graph of  $r = f(\theta)$  from  $\theta = \alpha$  to  $\theta = \beta$  is

**EXAMPLE 5:** Find the arc length of the curve  $r = 8(1 + \cos \theta)$  over the interval  $0 \leq \theta \leq 2\pi$ .



## Theorem: Area of a Surface of Revolution

Let  $f$  be a function whose derivative is continuous on an interval  $\alpha \leq \theta \leq \beta$ . The area of the surface formed by revolving the graph of  $r = f(\theta)$  from  $\theta = \alpha$  to  $\theta = \beta$  about

the polar axis is:

the line  $\theta = \frac{\pi}{2}$  is:

**EXAMPLE 6:** Find the area of the surface formed by revolving the curve

$r = 6 \cos \theta$  about the polar axis over the interval  $0 \leq \theta \leq \frac{\pi}{2}$ .

